


# Proporciones de Imágenes de Otoño (H)

Nombre: \_\_\_\_\_


Fecha: \_\_\_\_\_

Determine cada proporción y simplifique si es necesario.




$$\text{🍂} : (\text{🌳} + \text{🍂}) =$$

$$\text{🌳} : \text{🍂} =$$




$$\text{🌳} : (\text{🍂} + \text{🌳}) =$$

$$\text{🍂} : \text{🌳} =$$



$$\text{🌰} : \text{🍂} =$$

$$\text{🍂} : (\text{🌰} + \text{🍂}) =$$



$$\text{🍂} : (\text{🌿} + \text{🍂}) =$$

$$\text{🌿} : \text{🍂} =$$

# Proporciones de Imágenes de Otoño (H) Respuestas

Nombre: \_\_\_\_\_

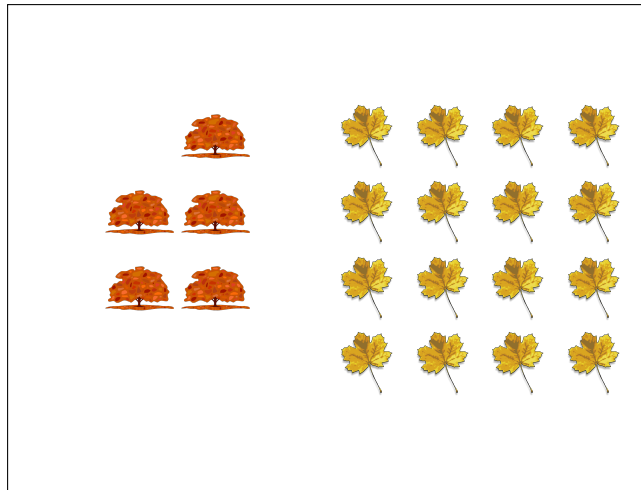
Fecha: \_\_\_\_\_

Determine cada proporción y simplifique si es necesario.




$$\text{🍂} : (\text{🌳} + \text{🍂}) = 23 : 43$$

$$\text{🌳} : \text{🍂} = 20 : 23$$




$$\text{🌳} : (\text{🍂} + \text{🌳}) = 5 : 21$$

$$\text{🍂} : \text{🌳} = 16 : 5$$



$$\text{🌰} : \text{🍂} = 7 : 5$$

$$\text{🍂} : (\text{🌰} + \text{🍂}) = 5 : 12$$



$$\text{🍂} : (\text{🌿} + \text{🍂}) = 18 : 41$$

$$\text{🌿} : \text{🍂} = 23 : 18$$