

Proporciones de Imágenes de Otoño (C)

Nombre: _____

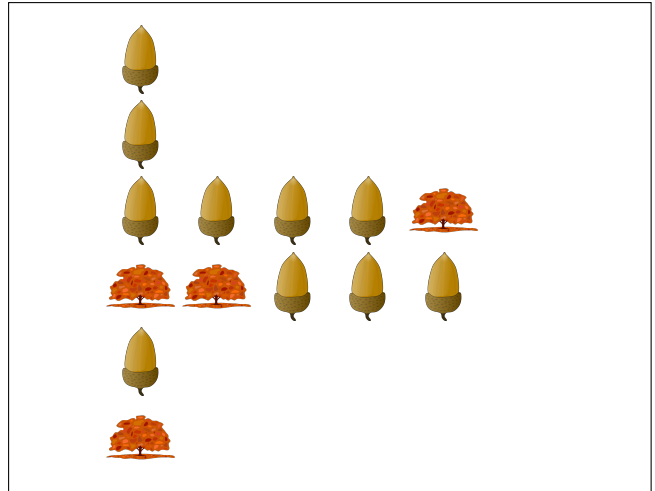
Fecha: _____

Determine cada proporción y simplifique si es necesario.




$$\text{Branch} : \text{Yellow Leaf} =$$

$$\text{Yellow Leaf} : (\text{Branch} + \text{Yellow Leaf}) =$$




$$\text{Autumn Tree} : (\text{Acorn} + \text{Autumn Tree}) =$$

$$\text{Acorn} : \text{Autumn Tree} =$$



$$\text{Leaf} : (\text{Tree} + \text{Leaf}) =$$

$$\text{Tree} : \text{Leaf} =$$



$$\text{Yellow Leaf} : \text{Orange Leaf} =$$

$$\text{Orange Leaf} : (\text{Yellow Leaf} + \text{Orange Leaf}) =$$

Proporciones de Imágenes de Otoño (C) Respuestas

Nombre: _____

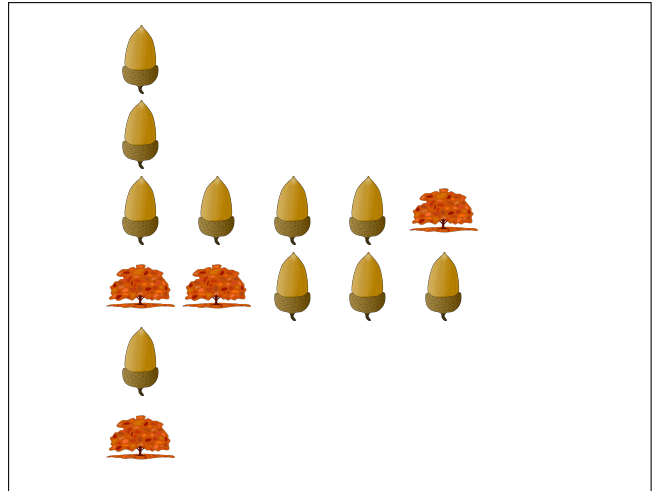
Fecha: _____

Determine cada proporción y simplifique si es necesario.




$$\text{branch} : \text{leaf} = 7 : 9$$

$$\text{leaf} : (\text{branch} + \text{leaf}) = 9 : 16$$




$$\text{tree} : (\text{acorn} + \text{tree}) = 4 : 14 = 2 : 7$$

$$\text{acorn} : \text{tree} = 10 : 4 = 5 : 2$$



$$\text{leaf} : (\text{tree} + \text{leaf}) = 12 : 24 = 1 : 2$$

$$\text{tree} : \text{leaf} = 12 : 12 = 1 : 1$$



$$\text{yellow leaf} : \text{orange leaf} = 15 : 14$$

$$\text{orange leaf} : (\text{yellow leaf} + \text{orange leaf}) = 14 : 29$$