

Proporciones de Imágenes de Otoño (I)

Nombre: _____

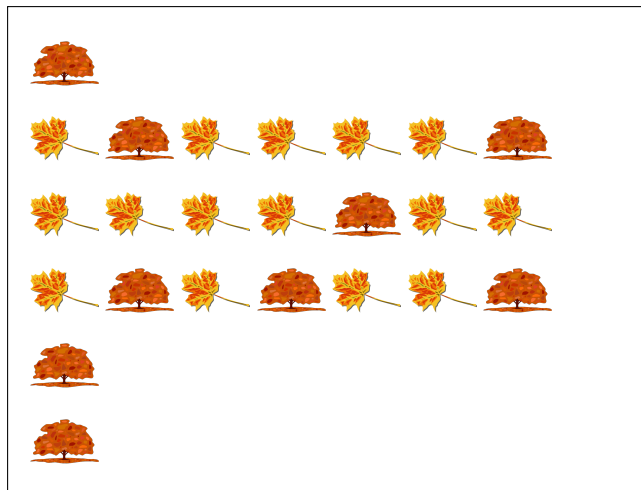
Fecha: _____

Determine cada proporción y simplifique si es necesario.




$$\text{leaf} : (\text{tree} + \text{leaf}) =$$

$$\text{tree} : \text{leaf} =$$



$$\text{tree} : \text{leaf} =$$

$$\text{leaf} : (\text{tree} + \text{leaf}) =$$



$$\text{acorn} : \text{leaf} =$$

$$\text{leaf} : (\text{acorn} + \text{leaf}) =$$



$$\text{leaf} : \text{leaf} =$$

$$\text{leaf} : (\text{leaf} + \text{leaf}) =$$

Proporciones de Imágenes de Otoño (I) Respuestas

Nombre: _____

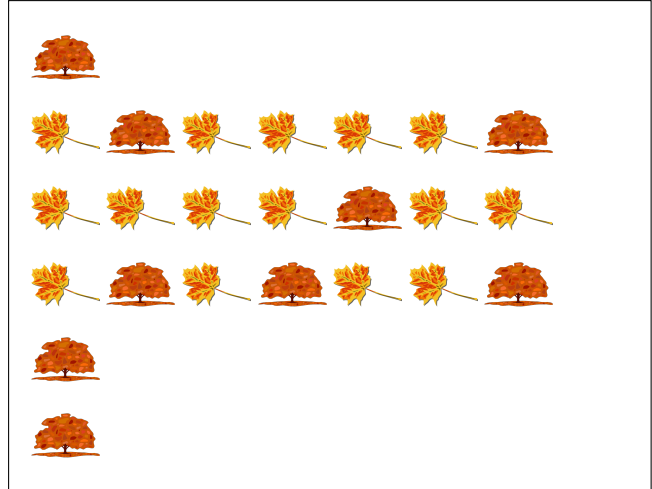
Fecha: _____

Determine cada proporción y simplifique si es necesario.




$$\text{leafy branch} : (\text{tree} + \text{leafy branch}) = 24 : 48 = 1 : 2$$

$$\text{tree} : \text{leafy branch} = 24 : 24 = 1 : 1$$




$$\text{tree} : \text{leaf} = 9 : 15 = 3 : 5$$

$$\text{leaf} : (\text{tree} + \text{leaf}) = 15 : 24 = 5 : 8$$



$$\text{acorn} : \text{leaf} = 7 : 9$$

$$\text{leaf} : (\text{acorn} + \text{leaf}) = 9 : 16$$



$$\text{oak leaf} : \text{maple leaf} = 12 : 8 = 3 : 2$$

$$\text{maple leaf} : (\text{oak leaf} + \text{maple leaf}) = 8 : 20 = 2 : 5$$