

# Proporciones de Imágenes de Otoño (J)

Nombre: \_\_\_\_\_

Fecha: \_\_\_\_\_

Determine cada proporción y simplifique si es necesario.




$$\text{leaf} : \text{tree} =$$

$$\text{tree} : (\text{leaf} + \text{tree}) =$$




$$\text{tree} : \text{branch} =$$

$$\text{branch} : (\text{tree} + \text{branch}) =$$



$$\text{leaf} : \text{acorn} =$$

$$\text{acorn} : (\text{leaf} + \text{acorn}) =$$



$$\text{yellow leaf} : (\text{orange leaf} + \text{yellow leaf}) =$$

$$\text{orange leaf} : \text{yellow leaf} =$$

# Proporciones de Imágenes de Otoño (J) Respuestas

Nombre: \_\_\_\_\_

Fecha: \_\_\_\_\_

Determine cada proporción y simplifique si es necesario.




$$\text{🍂} : \text{🌳} = 8 : 8 = 1 : 1$$

$$\text{🌳} : (\text{🍂} + \text{🌳}) = 8 : 16 = 1 : 2$$




$$\text{🌳} : \text{🍂} = 14 : 18 = 7 : 9$$

$$\text{🍂} : (\text{🌳} + \text{🍂}) = 18 : 32 = 9 : 16$$



$$\text{🍂} : \text{🌳} = 20 : 20 = 1 : 1$$

$$\text{🌳} : (\text{🍂} + \text{🌳}) = 20 : 40 = 1 : 2$$



$$\text{🍂} : (\text{🍂} + \text{🍂}) = 9 : 14$$

$$\text{🍂} : \text{🍂} = 5 : 9$$