

Proporciones de Imágenes de Otoño (F)

Nombre: _____


Fecha: _____

Determine cada proporción y simplifique si es necesario.




$$\text{🍁} : (\text{🌿} + \text{🍁}) =$$

$$\text{🌿} : (\text{🍁} + \text{🌿}) =$$



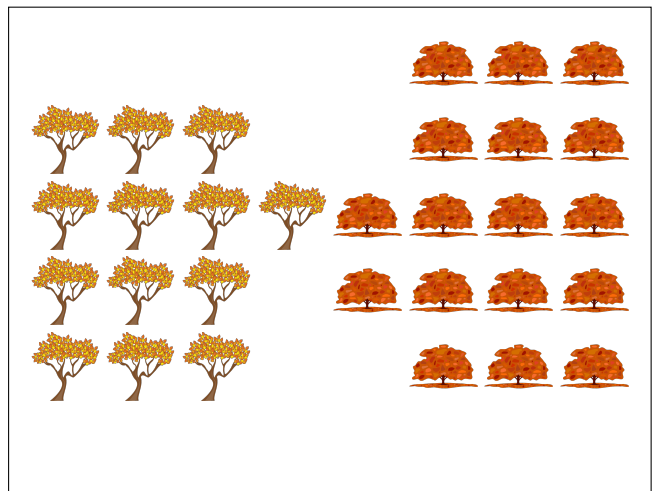
$$\text{🍁} : (\text{🌰} + \text{🍁}) =$$

$$\text{🌰} : (\text{🍁} + \text{🌰}) =$$



$$\text{🍁} : (\text{🌰} + \text{🍁}) =$$

$$\text{🌰} : (\text{🍁} + \text{🌰}) =$$



$$\text{🌳} : (\text{🌳} + \text{🌳}) =$$

$$\text{🌳} : (\text{🌳} + \text{🌳}) =$$

Proporciones de Imágenes de Otoño (F) Respuestas

Nombre: _____


Fecha: _____

Determine cada proporción y simplifique si es necesario.




$$\text{🍁} : (\text{🌿} + \text{🍁}) = 18 : 38 = 9 : 19$$

$$\text{🌿} : (\text{🍁} + \text{🌿}) = 20 : 38 = 10 : 19$$



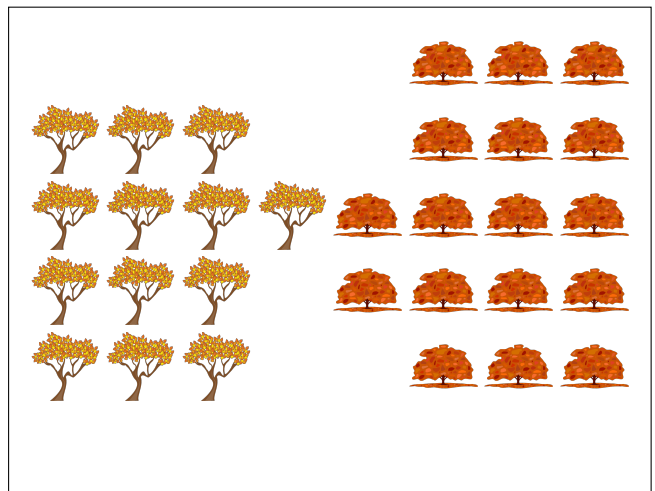
$$\text{🌼} : (\text{🌰} + \text{🌼}) = 9 : 17$$

$$\text{🌰} : (\text{🌼} + \text{🌰}) = 8 : 17$$



$$\text{🍂} : (\text{🍁} + \text{🍂}) = 8 : 32 = 1 : 4$$

$$\text{🍁} : (\text{🍂} + \text{🍁}) = 24 : 32 = 3 : 4$$



$$\text{🌳} : (\text{🍂} + \text{🌳}) = 13 : 30$$

$$\text{🍂} : (\text{🌳} + \text{🍂}) = 17 : 30$$