


Proporciones de Imágenes de Otoño (G)

Nombre: _____


Fecha: _____

Determine cada proporción y simplifique si es necesario.




$$\text{Yellow leaf} : (\text{Orange leaf} + \text{Yellow leaf}) =$$

$$\text{Orange leaf} : (\text{Yellow leaf} + \text{Orange leaf}) =$$




$$\text{Orange tree} : (\text{Green leaf} + \text{Orange tree}) =$$

$$\text{Green leaf} : (\text{Orange tree} + \text{Green leaf}) =$$



$$\text{Orange leaf} : (\text{Acorn} + \text{Orange leaf}) =$$

$$\text{Acorn} : (\text{Orange leaf} + \text{Acorn}) =$$



$$\text{Yellow tree} : (\text{Yellow leaf} + \text{Yellow tree}) =$$


$$\text{Yellow leaf} : (\text{Yellow tree} + \text{Yellow leaf}) =$$

Proporciones de Imágenes de Otoño (G) Respuestas

Nombre: _____


Fecha: _____

Determine cada proporción y simplifique si es necesario.




$$\text{🍂} : (\text{🍂} + \text{🍂}) = 4 : 18 = 2 : 9$$

$$\text{🍂} : (\text{🍂} + \text{🍂}) = 14 : 18 = 7 : 9$$




$$\text{🌳} : (\text{🌿} + \text{🌳}) = 11 : 17$$

$$\text{🌿} : (\text{🌳} + \text{🌿}) = 6 : 17$$



$$\text{🍂} : (\text{🌰} + \text{🍂}) = 21 : 32$$

$$\text{🌰} : (\text{🍂} + \text{🌰}) = 11 : 32$$



$$\text{🌳} : (\text{🍂} + \text{🌳}) = 16 : 30 = 8 : 15$$

$$\text{🍂} : (\text{🌳} + \text{🍂}) = 14 : 30 = 7 : 15$$