


# Proporciones de Imágenes de Otoño (H)

Nombre: \_\_\_\_\_


Fecha: \_\_\_\_\_

Determine cada proporción y simplifique si es necesario.




$$\text{Green leaf} : (\text{Orange leaf} + \text{Green leaf}) =$$

$$\text{Orange leaf} : (\text{Green leaf} + \text{Orange leaf}) =$$




$$\text{Acorn} : (\text{Yellow leaf} + \text{Acorn}) =$$

$$\text{Yellow leaf} : (\text{Acorn} + \text{Yellow leaf}) =$$



$$\text{Tree} : (\text{Yellow leaf} + \text{Tree}) =$$

$$\text{Yellow leaf} : (\text{Tree} + \text{Yellow leaf}) =$$



$$\text{Leaf} : (\text{Yellow tree} + \text{Leaf}) =$$


$$\text{Yellow tree} : (\text{Leaf} + \text{Yellow tree}) =$$

# Proporciones de Imágenes de Otoño (H) Respuestas

Nombre: \_\_\_\_\_


Fecha: \_\_\_\_\_

Determine cada proporción y simplifique si es necesario.



$$\text{🍂} : (\text{🍁} + \text{🍂}) = 10 : 29$$

$$\text{🍁} : (\text{🍂} + \text{🍁}) = 19 : 29$$




$$\text{🌰} : (\text{🍂} + \text{🌰}) = 21 : 45 = 7 : 15$$

$$\text{🍂} : (\text{🌰} + \text{🍂}) = 24 : 45 = 8 : 15$$



$$\text{🌳} : (\text{🍂} + \text{🌳}) = 22 : 44 = 1 : 2$$

$$\text{🍂} : (\text{🌳} + \text{🍂}) = 22 : 44 = 1 : 2$$



$$\text{🍂} : (\text{🌳} + \text{🍂}) = 22 : 33 = 2 : 3$$

$$\text{🌳} : (\text{🍂} + \text{🌳}) = 11 : 33 = 1 : 3$$