


Proporciones de Imágenes de Otoño (B)

Nombre: _____


Fecha: _____

Determine cada proporción y simplifique si es necesario.




$$\text{leaf} : (\text{acorn} + \text{leaf}) =$$

$$\text{acorn} : (\text{leaf} + \text{acorn}) =$$




$$\text{acorn} : (\text{leaf} + \text{acorn}) =$$

$$\text{leaf} : (\text{acorn} + \text{leaf}) =$$



$$\text{leaf} : (\text{tree} + \text{leaf}) =$$

$$\text{tree} : (\text{leaf} + \text{tree}) =$$



$$\text{tree} : (\text{leaf} + \text{tree}) =$$


$$\text{leaf} : (\text{tree} + \text{leaf}) =$$

Proporciones de Imágenes de Otoño (B) Respuestas

Nombre: _____


Fecha: _____

Determine cada proporción y simplifique si es necesario.




$$\text{🍂} : (\text{🌰} + \text{🍂}) = 18 : 30 = 3 : 5$$

$$\text{🌰} : (\text{🍂} + \text{🌰}) = 12 : 30 = 2 : 5$$




$$\text{🌳} : (\text{🍂} + \text{🌳}) = 4 : 7$$

$$\text{🍂} : (\text{🌳} + \text{🍂}) = 3 : 7$$



$$\text{🍂} : (\text{🌳} + \text{🍂}) = 15 : 31$$

$$\text{🌳} : (\text{🍂} + \text{🌳}) = 16 : 31$$



$$\text{🌳} : (\text{🍂} + \text{🌳}) = 17 : 36$$

$$\text{🍂} : (\text{🌳} + \text{🍂}) = 19 : 36$$