


Proporciones de Imágenes de Otoño (C)


Nombre: _____

Fecha: _____


Determine cada proporción y simplifique si es necesario.




$\text{🍂} : (\text{🌳} + \text{🍂}) =$
 $\text{🌳} : (\text{🍂} + \text{🌳}) =$



$\text{🍂} : (\text{🌳} + \text{🍂}) =$
 $\text{🌳} : (\text{🍂} + \text{🌳}) =$



$\text{🌳} : (\text{🌿} + \text{🌳}) =$
 $\text{🌿} : (\text{🌳} + \text{🌿}) =$




$\text{🍂} : (\text{🌰} + \text{🍂}) =$
 $\text{🌰} : (\text{🍂} + \text{🌰}) =$

Proporciones de Imágenes de Otoño (C) Respuestas


Nombre: _____

Fecha: _____


Determine cada proporción y simplifique si es necesario.




$\text{🍂} : (\text{🌳} + \text{🍂}) = 5 : 10 = 1 : 2$
 $\text{🌳} : (\text{🍂} + \text{🌳}) = 5 : 10 = 1 : 2$



$\text{🍂} : (\text{🍂} + \text{🍂}) = 8 : 17$
 $\text{🍂} : (\text{🍂} + \text{🍂}) = 9 : 17$



$\text{🌳} : (\text{🍂} + \text{🌳}) = 12 : 25$
 $\text{🍂} : (\text{🌳} + \text{🍂}) = 13 : 25$



$\text{🍂} : (\text{🌰} + \text{🍂}) = 9 : 18 = 1 : 2$
 $\text{🌰} : (\text{🍂} + \text{🌰}) = 9 : 18 = 1 : 2$