


Proporciones de Imágenes de Otoño (D)

Nombre: _____


Fecha: _____

Determine cada proporción y simplifique si es necesario.




$$\text{leaf} : (\text{acorn} + \text{leaf}) =$$

$$\text{acorn} : (\text{leaf} + \text{acorn}) =$$




$$\text{acorn} : (\text{leaf} + \text{acorn}) =$$

$$\text{leaf} : (\text{acorn} + \text{leaf}) =$$



$$\text{tree (green)} : (\text{tree (yellow)} + \text{tree (green)}) =$$

$$\text{tree (yellow)} : (\text{tree (green)} + \text{tree (yellow)}) =$$



$$\text{tree (orange)} : (\text{tree (yellow)} + \text{tree (orange)}) =$$


$$\text{tree (yellow)} : (\text{tree (orange)} + \text{tree (yellow)}) =$$

Proporciones de Imágenes de Otoño (D) Respuestas

Nombre: _____


Fecha: _____

Determine cada proporción y simplifique si es necesario.



$$\text{🍂} : (\text{🌰} + \text{🍂}) = 11 : 21$$

$$\text{🌰} : (\text{🍂} + \text{🌰}) = 10 : 21$$




$$\text{🍂} : (\text{🍂} + \text{🍂}) = 5 : 12$$

$$\text{🍂} : (\text{🍂} + \text{🍂}) = 7 : 12$$



$$\text{🌿} : (\text{🌳} + \text{🌿}) = 8 : 15$$

$$\text{🌳} : (\text{🌿} + \text{🌳}) = 7 : 15$$



$$\text{🍂} : (\text{🌳} + \text{🍂}) = 6 : 14 = 3 : 7$$

$$\text{🌳} : (\text{🍂} + \text{🌳}) = 8 : 14 = 4 : 7$$