


# Proporciones de Imágenes de Otoño (E)

Nombre: \_\_\_\_\_


Fecha: \_\_\_\_\_

Determine cada proporción y simplifique si es necesario.




$$\text{acorn} : (\text{leaf} + \text{acorn}) =$$

$$\text{leaf} : (\text{acorn} + \text{leaf}) =$$




$$\text{tree} : (\text{leaf} + \text{tree}) =$$

$$\text{leaf} : (\text{tree} + \text{leaf}) =$$



$$\text{leaf} : (\text{lined leaf} + \text{leaf}) =$$

$$\text{lined leaf} : (\text{leaf} + \text{lined leaf}) =$$



$$\text{maple leaf} : (\text{oak leaf} + \text{maple leaf}) =$$


$$\text{oak leaf} : (\text{maple leaf} + \text{oak leaf}) =$$

# Proporciones de Imágenes de Otoño (E) Respuestas

Nombre: \_\_\_\_\_

Fecha: \_\_\_\_\_

Determine cada proporción y simplifique si es necesario.




$$\text{🌰} : (\text{🍂} + \text{🌰}) = 9 : 15 = 3 : 5$$

$$\text{🍂} : (\text{🌰} + \text{🍂}) = 6 : 15 = 2 : 5$$




$$\text{🌳} : (\text{🍃} + \text{🌳}) = 12 : 24 = 1 : 2$$

$$\text{🍃} : (\text{🌳} + \text{🍃}) = 12 : 24 = 1 : 2$$



$$\text{🍁} : (\text{🌰} + \text{🍁}) = 6 : 10 = 3 : 5$$

$$\text{🌰} : (\text{🍁} + \text{🌰}) = 4 : 10 = 2 : 5$$



$$\text{🍁} : (\text{🍁} + \text{🍁}) = 11 : 19$$

$$\text{🌰} : (\text{🍁} + \text{🌰}) = 8 : 19$$