


Proporciones de Imágenes de Otoño (F)

Nombre: _____

Fecha: _____

Determine cada proporción y simplifique si es necesario.




$$\text{acorn} : (\text{tree} + \text{acorn}) =$$

$$\text{tree} : (\text{acorn} + \text{tree}) =$$



$$\text{yellow leaf} : (\text{orange leaf} + \text{yellow leaf}) =$$

$$\text{orange leaf} : (\text{yellow leaf} + \text{orange leaf}) =$$



$$\text{green leaf} : (\text{orange leaf} + \text{green leaf}) =$$

$$\text{orange leaf} : (\text{green leaf} + \text{orange leaf}) =$$



$$\text{yellow tree} : (\text{orange tree} + \text{yellow tree}) =$$


$$\text{orange tree} : (\text{yellow tree} + \text{orange tree}) =$$

Proporciones de Imágenes de Otoño (F) Respuestas

Nombre: _____


Fecha: _____

Determine cada proporción y simplifique si es necesario.



$$\text{🌰} : (\text{🌳} + \text{🌰}) = 7 : 17$$

$$\text{🌳} : (\text{🌰} + \text{🌳}) = 10 : 17$$



$$\text{🍃} : (\text{🍂} + \text{🍃}) = 23 : 48$$

$$\text{🍂} : (\text{🍃} + \text{🍂}) = 25 : 48$$



$$\text{🍃} : (\text{🍂} + \text{🍃}) = 12 : 21 = 4 : 7$$

$$\text{🍂} : (\text{🍃} + \text{🍂}) = 9 : 21 = 3 : 7$$



$$\text{🌳} : (\text{🍂} + \text{🌳}) = 11 : 24$$

$$\text{🍂} : (\text{🌳} + \text{🍂}) = 13 : 24$$