


Proporciones de Imágenes de Otoño (G)

Nombre: _____


Fecha: _____

Determine cada proporción y simplifique si es necesario.




$$\text{orange leaf} : (\text{yellow-green leaf} + \text{orange leaf}) =$$

$$\text{yellow-green leaf} : (\text{orange leaf} + \text{yellow-green leaf}) =$$



$$\text{leaf} : (\text{tree} + \text{leaf}) =$$

$$\text{tree} : (\text{leaf} + \text{tree}) =$$



$$\text{acorn} : (\text{tree} + \text{acorn}) =$$

$$\text{tree} : (\text{acorn} + \text{tree}) =$$



$$\text{single leaf} : (\text{branch} + \text{single leaf}) =$$


$$\text{branch} : (\text{single leaf} + \text{branch}) =$$

Proporciones de Imágenes de Otoño (G) Respuestas

Nombre: _____


Fecha: _____

Determine cada proporción y simplifique si es necesario.




$$\text{🍂} : (\text{🍂} + \text{🍃}) = 5 : 14$$

$$\text{🍃} : (\text{🍂} + \text{🍃}) = 9 : 14$$




$$\text{🍂} : (\text{🌳} + \text{🍂}) = 8 : 21$$

$$\text{🌳} : (\text{🍂} + \text{🌳}) = 13 : 21$$



$$\text{🌰} : (\text{🌳} + \text{🌰}) = 15 : 33 = 5 : 11$$

$$\text{🌳} : (\text{🌰} + \text{🌳}) = 18 : 33 = 6 : 11$$



$$\text{🍂} : (\text{🌿} + \text{🍂}) = 11 : 20$$

$$\text{🌿} : (\text{🍂} + \text{🌿}) = 9 : 20$$