

Números Perdidos de Verano Operaciones Combinadas (H)

Nombre: _____

Fecha: _____

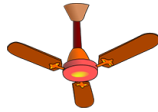
Puntuación: _____

Completen los dígitos que faltan, que se derritieron bajo el ardiente sol del verano.

1.
$$\begin{array}{r} 6 \\ 9 \overline{) 5 \square} \end{array}$$



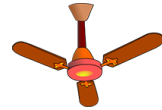
2.
$$\begin{array}{r} 10 \\ \square \overline{) 50} \end{array}$$



3.
$$\begin{array}{r} \square \\ 9 \overline{) 36} \end{array}$$



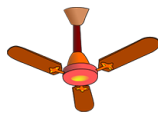
4.
$$\begin{array}{r} \square 52 \\ + 3 \square \square \\ \hline 515 \end{array}$$



5.
$$\begin{array}{r} \square \\ 10 \overline{) 30} \end{array}$$



6.
$$\begin{array}{r} \square \\ 6 \overline{) 18} \end{array}$$



7.
$$\begin{array}{r} \square 8 \square \\ - 37 \\ \hline 6 \square 4 \end{array}$$



8.
$$\begin{array}{r} \square \\ \times 10 \\ \hline 20 \end{array}$$



9.
$$\begin{array}{r} 1 \square \square \\ + \square 96 \\ \hline 529 \end{array}$$



10.
$$\begin{array}{r} \square \square 05 \\ - 456 \\ \hline 7 \square \square \end{array}$$



11.
$$\begin{array}{r} \square 3 \square 8 \\ - \square 9 \square \\ \hline 636 \end{array}$$



12.
$$\begin{array}{r} \square 76 \\ - 548 \\ \hline 2 \square \square \end{array}$$



13.
$$\begin{array}{r} \square 28 \\ + 10 \square \\ \hline 7 \square 9 \end{array}$$



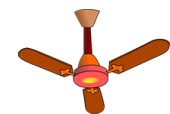
14.
$$\begin{array}{r} 3 \square \square \\ + \square 20 \\ \hline 880 \end{array}$$



15.
$$\begin{array}{r} \square 81 \\ + 5 \square 2 \\ \hline \square 16 \square \end{array}$$



16.
$$\begin{array}{r} \square \\ \times 4 \\ \hline 16 \end{array}$$



17.
$$\begin{array}{r} \square \\ \times 8 \\ \hline 64 \end{array}$$



18.
$$\begin{array}{r} \square \\ \times 10 \\ \hline 30 \end{array}$$



19.
$$\begin{array}{r} \square \square 1 \\ - 132 \\ \hline 4 \square \end{array}$$



20.
$$\begin{array}{r} 7 \\ \times 3 \\ \hline 2 \square \end{array}$$

