

Números Perdidos de Verano Suma y Resta (B)

Nombre: _____

Fecha: _____

Puntuación: _____

Completen los dígitos que faltan, que se derritieron bajo el ardiente sol del verano.

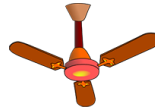
1.
$$\begin{array}{r} \square 33 \\ - 18\square \\ \hline \square 7 \end{array}$$



2.
$$\begin{array}{r} 9\square 0 \\ - 360 \\ \hline \square 6\square \end{array}$$



3.
$$\begin{array}{r} 242 \\ + 1\square 4 \\ \hline \square 4\square \end{array}$$



4.
$$\begin{array}{r} 171 \\ + 147 \\ \hline \square\square\square \end{array}$$



5.
$$\begin{array}{r} 8\square\square \\ + \square 15 \\ \hline \square 230 \end{array}$$



6.
$$\begin{array}{r} \square\square 6 \\ + 18 \\ \hline 15\square \end{array}$$



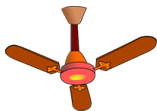
7.
$$\begin{array}{r} \square\square 3 \\ + 11\square \\ \hline \square 026 \end{array}$$



8.
$$\begin{array}{r} \square 07 \\ - \square\square \\ \hline 467 \end{array}$$



9.
$$\begin{array}{r} 848 \\ - \square\square\square \\ \hline 529 \end{array}$$



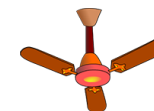
10.
$$\begin{array}{r} 55\square \\ - \square 3 \\ \hline \square 43 \end{array}$$



11.
$$\begin{array}{r} 48\square \\ - 1\square 5 \\ \hline \square 63 \end{array}$$




12.
$$\begin{array}{r} 1\square 3 \\ + \square 83 \\ \hline 70\square \end{array}$$



13.
$$\begin{array}{r} \square 52 \\ + 7\square\square \\ \hline \square 192 \end{array}$$



14.
$$\begin{array}{r} 241 \\ - 50 \\ \hline \square\square\square \end{array}$$



15.
$$\begin{array}{r} 97\square \\ + 651 \\ \hline \square\square\square 6 \end{array}$$



16.
$$\begin{array}{r} \square\square\square \\ + 68 \\ \hline 699 \end{array}$$



17.
$$\begin{array}{r} \square 6\square \\ - 273 \\ \hline \square 8 \end{array}$$



18.
$$\begin{array}{r} \square 2\square \\ + 4\square 8 \\ \hline 672 \end{array}$$



19.
$$\begin{array}{r} \square\square 00 \\ - 7\square\square \\ \hline 235 \end{array}$$



20.
$$\begin{array}{r} \square 018 \\ - 4\square 3 \\ \hline \square 7\square \end{array}$$

