

Números Perdidos de Verano Suma y Resta (C)

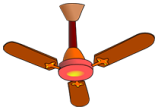
Nombre: _____

Fecha: _____

Puntuación: _____

Completen los dígitos que faltan, que se derritieron bajo el ardiente sol del verano.

1.
$$\begin{array}{r} \square 2 \square \\ - 297 \\ \hline \square 7 \end{array}$$



2.
$$\begin{array}{r} \square 27 \\ - 7\square\square \\ \hline 186 \end{array}$$



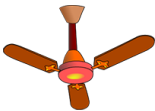
3.
$$\begin{array}{r} \square 21 \\ + 10\square \\ \hline 4\square 5 \end{array}$$



4.
$$\begin{array}{r} 10 \\ + \square\square\square \\ \hline 606 \end{array}$$



5.
$$\begin{array}{r} 48\square \\ + 731 \\ \hline \square\square\square 2 \end{array}$$



6.
$$\begin{array}{r} \square 4\square 0 \\ - \square 25 \\ \hline 58\square \end{array}$$



7.
$$\begin{array}{r} \square 89 \\ + 7\square 7 \\ \hline \square 53\square \end{array}$$



8.
$$\begin{array}{r} \square\square 49 \\ - 513 \\ \hline 7\square\square \end{array}$$



9.
$$\begin{array}{r} \square 206 \\ - \square 8\square \\ \hline 7\square 3 \end{array}$$



10.
$$\begin{array}{r} \square 053 \\ - \square 37 \\ \hline 2\square\square \end{array}$$



11.
$$\begin{array}{r} \square\square 2 \\ + 27\square \\ \hline 601 \end{array}$$



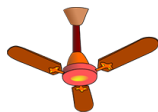
12.
$$\begin{array}{r} \square 00\square \\ - 350 \\ \hline \square\square 5 \end{array}$$



13.
$$\begin{array}{r} 87\square \\ - 714 \\ \hline \square\square 7 \end{array}$$




14.
$$\begin{array}{r} \square 59 \\ + 27\square \\ \hline 6\square 9 \end{array}$$



15.
$$\begin{array}{r} 18\square \\ + \square\square 9 \\ \hline 977 \end{array}$$



16.
$$\begin{array}{r} 6\square\square \\ - 377 \\ \hline \square 98 \end{array}$$



17.
$$\begin{array}{r} 836 \\ + \square\square\square \\ \hline \square 717 \end{array}$$



18.
$$\begin{array}{r} 48\square \\ - 186 \\ \hline \square\square 5 \end{array}$$



19.
$$\begin{array}{r} 234 \\ + \square 72 \\ \hline 4\square\square \end{array}$$



20.
$$\begin{array}{r} \square 83 \\ + 41\square \\ \hline 7\square 3 \end{array}$$

