

Números Perdidos de Verano Suma (E)

Nombre: _____

Fecha: _____

Puntuación: _____

Completen los dígitos que faltan, que se derritieron bajo el ardiente sol del verano.

1.
$$\begin{array}{r} 615 \\ + \quad \square\square\square \\ \hline 947 \end{array}$$




2.
$$\begin{array}{r} 68\square \\ + \quad \square\square 8 \\ \hline 925 \end{array}$$



3.
$$\begin{array}{r} 9\square\square \\ + 85 \\ \hline \square 97 \end{array}$$



4.
$$\begin{array}{r} \square\square 7 \\ + 92\square \\ \hline \square 190 \end{array}$$



5.
$$\begin{array}{r} 1\square\square \\ + 27 \\ \hline \square 64 \end{array}$$



6.
$$\begin{array}{r} \square\square\square \\ + 205 \\ \hline \square 111 \end{array}$$



7.
$$\begin{array}{r} 2\square 3 \\ + 696 \\ \hline \square 0\square \end{array}$$



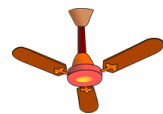
8.
$$\begin{array}{r} 733 \\ + 9\square\square \\ \hline \square\square 11 \end{array}$$




9.
$$\begin{array}{r} \square\square 0 \\ + 12\square \\ \hline 347 \end{array}$$



10.
$$\begin{array}{r} \square 68 \\ + 355 \\ \hline \square 3\square\square \end{array}$$



11.
$$\begin{array}{r} 5\square 9 \\ + 541 \\ \hline \square\square 2\square \end{array}$$



12.
$$\begin{array}{r} \square 5 \\ + 7\square \\ \hline \square 04 \end{array}$$



13.
$$\begin{array}{r} 515 \\ + 990 \\ \hline \square\square\square\square \end{array}$$



14.
$$\begin{array}{r} 60\square \\ + \square 12 \\ \hline \square 1\square 2 \end{array}$$




15.
$$\begin{array}{r} \square\square 7 \\ + 1\square \\ \hline 272 \end{array}$$



16.
$$\begin{array}{r} 2\square\square \\ + \square 63 \\ \hline \square 214 \end{array}$$




17.
$$\begin{array}{r} 51\square \\ + 7\square 4 \\ \hline \square\square 92 \end{array}$$



18.
$$\begin{array}{r} 706 \\ + 84\square \\ \hline \square\square\square 6 \end{array}$$



19.
$$\begin{array}{r} 110 \\ + \square 9\square \\ \hline 5\square 5 \end{array}$$



20.
$$\begin{array}{r} 492 \\ + 985 \\ \hline \square\square\square\square \end{array}$$

