

Números Perdidos de Verano Suma (F)

Nombre: _____

Fecha: _____

Puntuación: _____

Completen los dígitos que faltan, que se derritieron bajo el ardiente sol del verano.

1.
$$\begin{array}{r} 4 \square 8 \\ + 5 0 2 \\ \hline \square 2 \square \end{array}$$



2.
$$\begin{array}{r} 5 \square 1 \\ + 7 7 4 \\ \hline \square \square 7 \square \end{array}$$



3.
$$\begin{array}{r} \square \square 6 \\ + 7 9 \square \\ \hline \square 5 5 7 \end{array}$$



4.
$$\begin{array}{r} 3 \square 5 \\ + 6 9 \\ \hline \square 8 \square \end{array}$$



5.
$$\begin{array}{r} 3 5 \square \\ + 6 5 \\ \hline \square \square 7 \end{array}$$



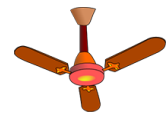
6.
$$\begin{array}{r} 1 \square 9 \\ + 1 2 \square \\ \hline \square 4 9 \end{array}$$



7.
$$\begin{array}{r} 4 5 \\ + \square \square 7 \\ \hline 5 9 \square \end{array}$$




8.
$$\begin{array}{r} 6 9 4 \\ + 2 \square \square \\ \hline \square 6 5 \end{array}$$



9.
$$\begin{array}{r} \square 9 9 \\ + \square 1 \\ \hline 5 8 \square \end{array}$$



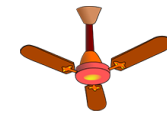
10.
$$\begin{array}{r} \square 7 4 \\ + 3 \square 8 \\ \hline 5 2 \square \end{array}$$



11.
$$\begin{array}{r} \square \square \\ + \square 8 6 \\ \hline 9 7 8 \end{array}$$



12.
$$\begin{array}{r} \square \square \square \\ + 4 7 5 \\ \hline \square 4 4 0 \end{array}$$



13.
$$\begin{array}{r} \square 6 \square \\ + 6 \square 7 \\ \hline \square 5 8 1 \end{array}$$



14.
$$\begin{array}{r} \square \square \square \\ + 2 2 7 \\ \hline 6 8 9 \end{array}$$




15.
$$\begin{array}{r} 7 \square \square \\ + \square 5 8 \\ \hline \square 5 2 4 \end{array}$$



16.
$$\begin{array}{r} 4 9 \square \\ + \square \square 9 \\ \hline \square 2 9 5 \end{array}$$



17.
$$\begin{array}{r} \square 4 4 \\ + 2 \square 1 \\ \hline \square 1 8 \square \end{array}$$



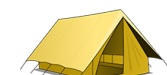
18.
$$\begin{array}{r} 3 \square \square \\ + \square 2 3 \\ \hline \square 1 8 3 \end{array}$$



19.
$$\begin{array}{r} 4 7 3 \\ + \square 2 5 \\ \hline 7 \square \square \end{array}$$



20.
$$\begin{array}{r} 1 \square 7 \\ + \square 0 5 \\ \hline \square 0 0 \square \end{array}$$



Números Perdidos de Verano Suma (F) Respuestas

Nombre: _____

Fecha: _____

Puntuación: _____

Completen los dígitos que faltan, que se derritieron bajo el ardiente sol del verano.

1.
$$\begin{array}{r} 4 \boxed{1} 8 \\ + 5 0 2 \\ \hline \boxed{9} \boxed{2} \boxed{0} \end{array}$$



2.
$$\begin{array}{r} 5 \boxed{0} 1 \\ + 7 7 4 \\ \hline \boxed{1} \boxed{2} \boxed{7} \boxed{5} \end{array}$$



3.
$$\begin{array}{r} \boxed{7} \boxed{6} 6 \\ + 7 9 \boxed{1} \\ \hline \boxed{1} 5 5 7 \end{array}$$



4.
$$\begin{array}{r} 3 \boxed{1} 5 \\ + 6 9 \\ \hline \boxed{3} \boxed{8} \boxed{4} \end{array}$$



5.
$$\begin{array}{r} 3 5 \boxed{2} \\ + 6 5 \\ \hline \boxed{4} \boxed{1} 7 \end{array}$$



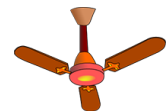
6.
$$\begin{array}{r} 1 \boxed{2} 9 \\ + 1 2 \boxed{0} \\ \hline \boxed{2} 4 9 \end{array}$$



7.
$$\begin{array}{r} 4 5 \\ + \boxed{5} \boxed{4} 7 \\ \hline 5 9 \boxed{2} \end{array}$$




8.
$$\begin{array}{r} 6 9 4 \\ + 2 \boxed{7} \boxed{1} \\ \hline \boxed{9} 6 5 \end{array}$$



9.
$$\begin{array}{r} \boxed{4} 9 9 \\ + \boxed{8} 1 \\ \hline 5 8 \boxed{0} \end{array}$$



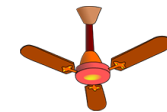
10.
$$\begin{array}{r} \boxed{1} 7 4 \\ + 3 \boxed{4} 8 \\ \hline 5 2 \boxed{2} \end{array}$$



11.
$$\begin{array}{r} \boxed{9} \boxed{2} \\ + \boxed{8} 8 6 \\ \hline 9 7 8 \end{array}$$



12.
$$\begin{array}{r} \boxed{9} \boxed{6} \boxed{5} \\ + 4 7 5 \\ \hline \boxed{1} 4 4 0 \end{array}$$



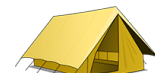
13.
$$\begin{array}{r} \boxed{9} \boxed{6} \boxed{4} \\ + 6 \boxed{1} 7 \\ \hline \boxed{1} 5 8 1 \end{array}$$



14.
$$\begin{array}{r} \boxed{4} \boxed{6} \boxed{2} \\ + 2 2 7 \\ \hline 6 8 9 \end{array}$$



15.
$$\begin{array}{r} 7 \boxed{6} \boxed{6} \\ + \boxed{7} 5 8 \\ \hline \boxed{1} 5 2 4 \end{array}$$



16.
$$\begin{array}{r} 4 9 \boxed{6} \\ + \boxed{7} \boxed{9} 9 \\ \hline \boxed{1} 2 9 5 \end{array}$$



17.
$$\begin{array}{r} \boxed{9} 4 4 \\ + 2 \boxed{4} 1 \\ \hline \boxed{1} 1 8 5 \end{array}$$



18.
$$\begin{array}{r} 3 \boxed{6} \boxed{0} \\ + \boxed{8} 2 3 \\ \hline \boxed{1} 1 8 3 \end{array}$$



19.
$$\begin{array}{r} 4 7 3 \\ + \boxed{3} 2 5 \\ \hline 7 \boxed{9} \boxed{8} \end{array}$$



20.
$$\begin{array}{r} 1 \boxed{9} 7 \\ + \boxed{8} 0 5 \\ \hline \boxed{1} 0 0 \boxed{2} \end{array}$$

