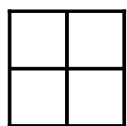
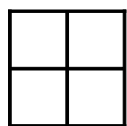


Colorear Cuartos (E)

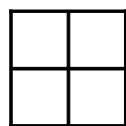
Coloree para modelar cada fracción.



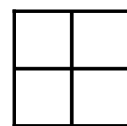
$\frac{3}{4}$




$\frac{3}{4}$



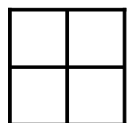
$\frac{1}{4}$




$\frac{4}{4}$



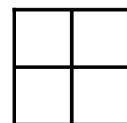
$\frac{3}{4}$



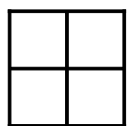
$\frac{3}{4}$



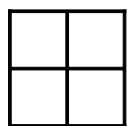
$\frac{1}{4}$



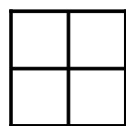
$\frac{3}{4}$



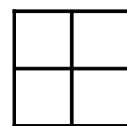
$\frac{4}{4}$



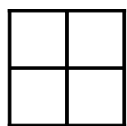
$\frac{1}{4}$



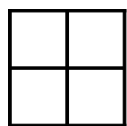
$\frac{3}{4}$



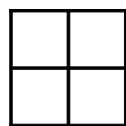
$\frac{3}{4}$



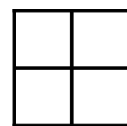
$\frac{2}{4}$



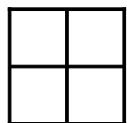
$\frac{3}{4}$



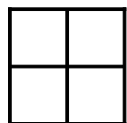
$\frac{4}{4}$



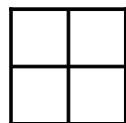
$\frac{3}{4}$



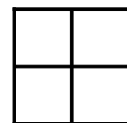
$\frac{1}{4}$



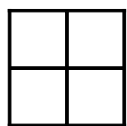
$\frac{2}{4}$



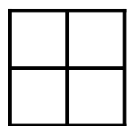
$\frac{2}{4}$



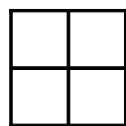
$\frac{4}{4}$



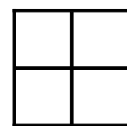
$\frac{2}{4}$



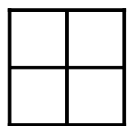
$\frac{3}{4}$



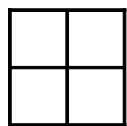
$\frac{1}{4}$



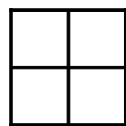
$\frac{4}{4}$



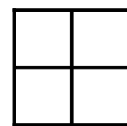
$\frac{4}{4}$



$\frac{1}{4}$



$\frac{1}{4}$




$\frac{3}{4}$


Colorear Cuartos (E) Respuestas

Coloree para modelar cada fracción.


Nota: Estas son sólo algunas de las posibles respuestas.




$$\frac{3}{4}$$




$$\frac{3}{4}$$




$$\frac{1}{4}$$




$$\frac{4}{4}$$



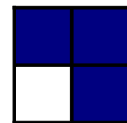
$$\frac{3}{4}$$




$$\frac{3}{4}$$




$$\frac{1}{4}$$



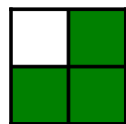
$$\frac{3}{4}$$



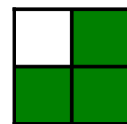
$$\frac{4}{4}$$




$$\frac{1}{4}$$




$$\frac{3}{4}$$




$$\frac{3}{4}$$




$$\frac{2}{4}$$



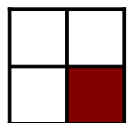
$$\frac{3}{4}$$




$$\frac{4}{4}$$



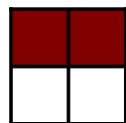
$$\frac{3}{4}$$




$$\frac{1}{4}$$




$$\frac{2}{4}$$




$$\frac{2}{4}$$




$$\frac{4}{4}$$




$$\frac{2}{4}$$




$$\frac{3}{4}$$




$$\frac{1}{4}$$




$$\frac{4}{4}$$




$$\frac{4}{4}$$



$$\frac{1}{4}$$



$$\frac{1}{4}$$



$$\frac{3}{4}$$