


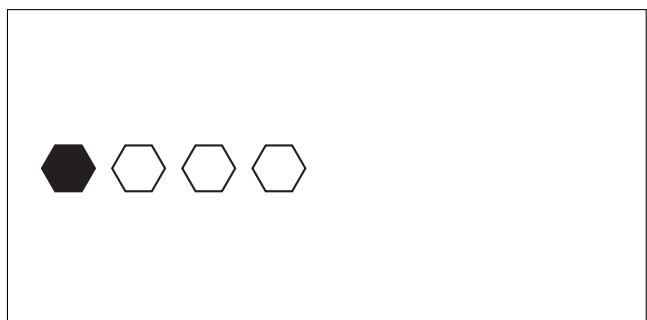



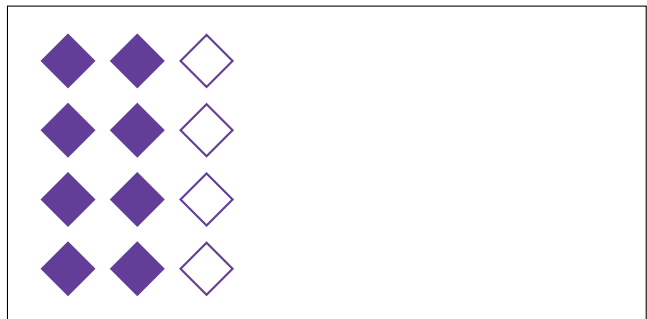
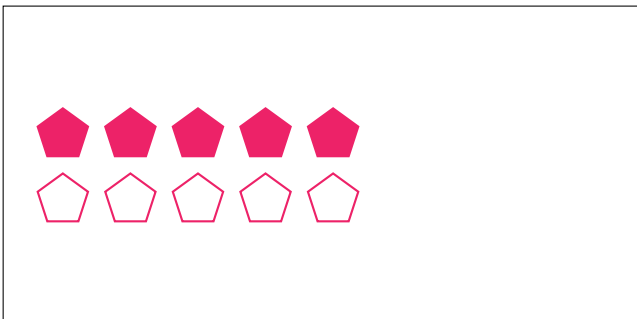


# Partes de Un Grupo (A)




En este grupo  
hay 16 formas y  
12 están rellenas.

$$\frac{12 \text{ formas rellenas}}{16 \text{ formas en el grupo}} = \frac{12}{16} = \frac{3}{4}$$

Escriba una fracción para cada uno de los modelos siguientes.




# Partes de Un Grupo (A) Respuestas



En este grupo  
hay 16 formas y  
12 están rellenas.

$$\frac{12 \text{ formas rellenas}}{16 \text{ formas en el grupo}} = \frac{12}{16} = \frac{3}{4}$$

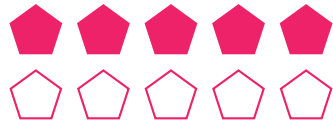
Escriba una fracción para cada uno de los modelos siguientes.




$$\frac{12}{18} = \frac{2}{3}$$



$$\frac{3}{4}$$




$$\frac{5}{10} = \frac{1}{2}$$




$$\frac{8}{12} = \frac{2}{3}$$



$$\frac{2}{4} = \frac{1}{2}$$



$$\frac{15}{20} = \frac{3}{4}$$



$$\frac{6}{9} = \frac{2}{3}$$



$$\frac{1}{4}$$