


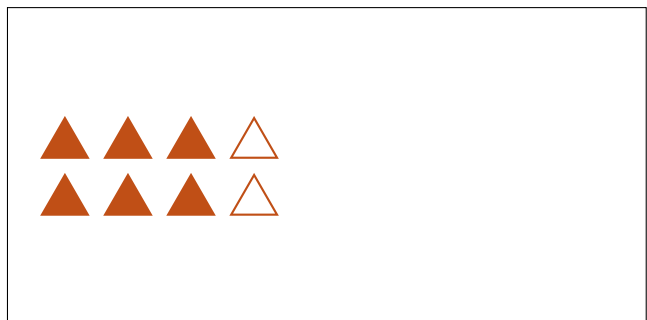
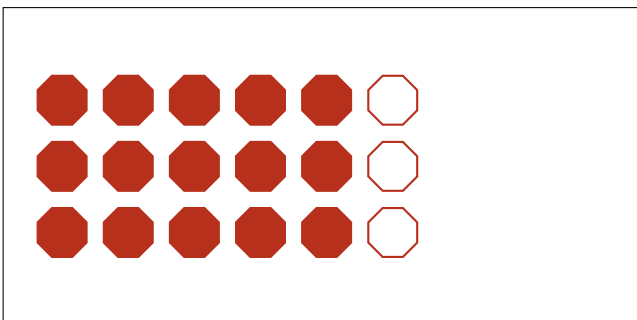
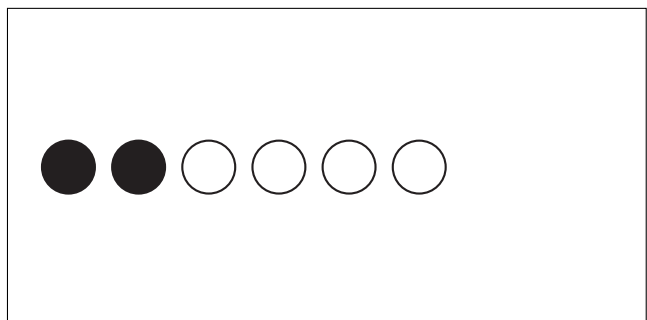

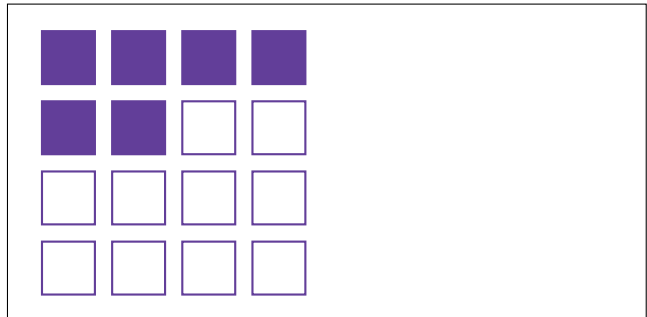
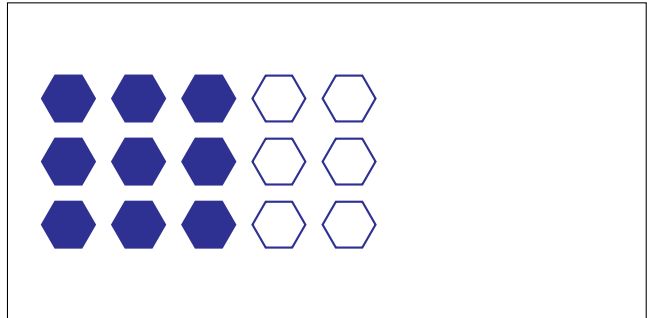
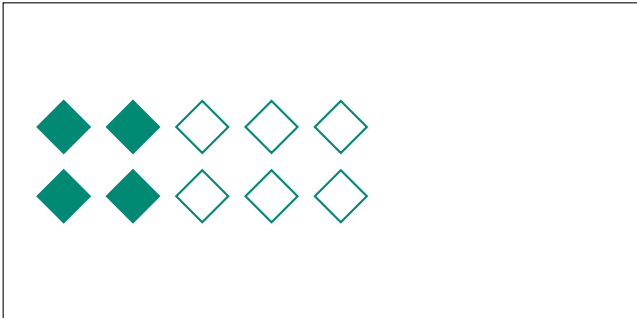
# Partes de Un Grupo (A)




En este grupo  
hay 24 formas y  
8 están rellenas.

$$\frac{8 \text{ formas rellenas}}{24 \text{ formas en el grupo}} = \frac{8}{24} = \frac{1}{3}$$

Escriba una fracción para cada uno de los modelos siguientes.




# Partes de Un Grupo (A) Respuestas



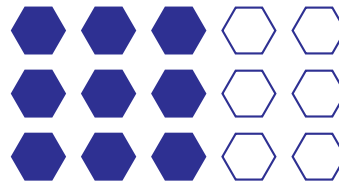
En este grupo  
hay 24 formas y  
8 están rellenas.

$$\frac{8 \text{ formas rellenas}}{24 \text{ formas en el grupo}} = \frac{8}{24} = \frac{1}{3}$$


Escriba una fracción para cada uno de los modelos siguientes.




$$\frac{4}{10} = \frac{2}{5}$$




$$\frac{9}{15} = \frac{3}{5}$$



$$\frac{6}{9} = \frac{2}{3}$$




$$\frac{6}{16} = \frac{3}{8}$$



$$\frac{12}{24} = \frac{1}{2}$$



$$\frac{2}{6} = \frac{1}{3}$$



$$\frac{15}{18} = \frac{5}{6}$$



$$\frac{6}{8} = \frac{3}{4}$$