

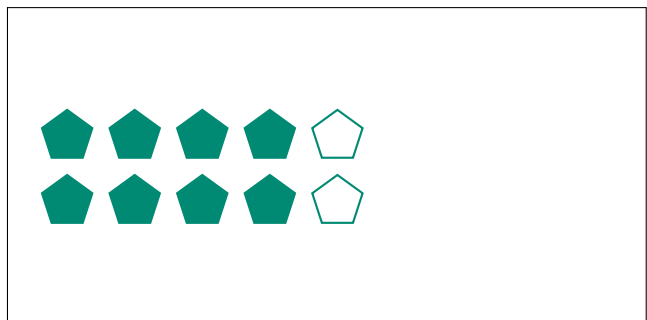
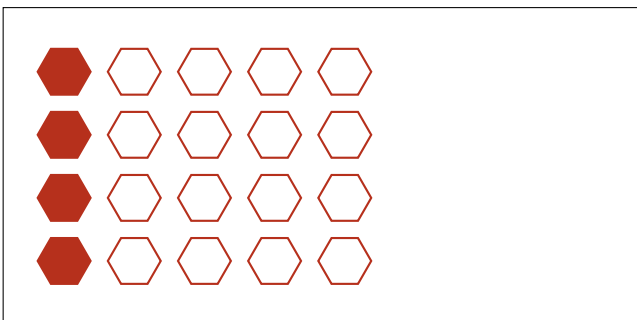
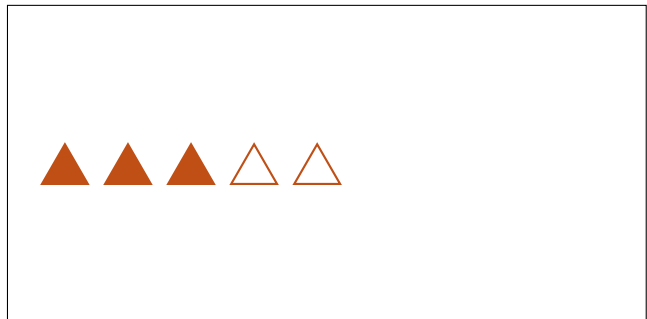
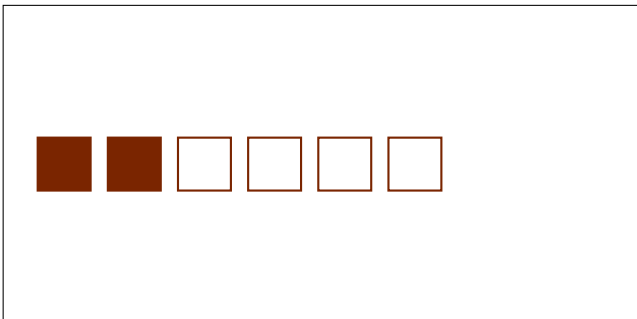
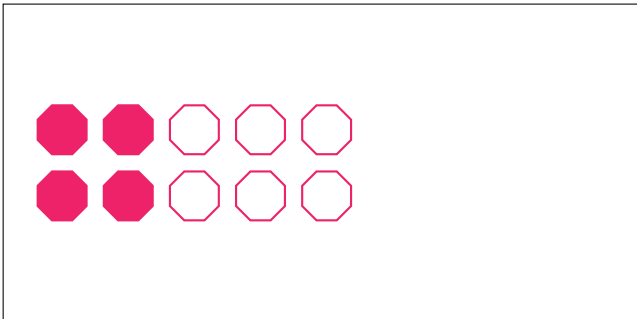


Partes de Un Grupo (B)



En este grupo
hay 10 formas y
5 están rellenas.

$$\frac{5 \text{ formas rellenas}}{10 \text{ formas en el grupo}} = \frac{5}{10} = \frac{1}{2}$$

Escriba una fracción para cada uno de los modelos siguientes.




Partes de Un Grupo (B) Respuestas




En este grupo
hay 10 formas y
5 están rellenas.

$$\frac{5 \text{ formas rellenas}}{10 \text{ formas en el grupo}} = \frac{5}{10} = \frac{1}{2}$$

Escriba una fracción para cada uno de los modelos siguientes.



$$\frac{4}{8} = \frac{1}{2}$$



$$\frac{6}{9} = \frac{2}{3}$$



$$\frac{4}{10} = \frac{2}{5}$$




$$\frac{18}{24} = \frac{3}{4}$$



$$\frac{2}{6} = \frac{1}{3}$$



$$\frac{3}{5}$$



$$\frac{4}{20} = \frac{1}{5}$$



$$\frac{8}{10} = \frac{4}{5}$$