

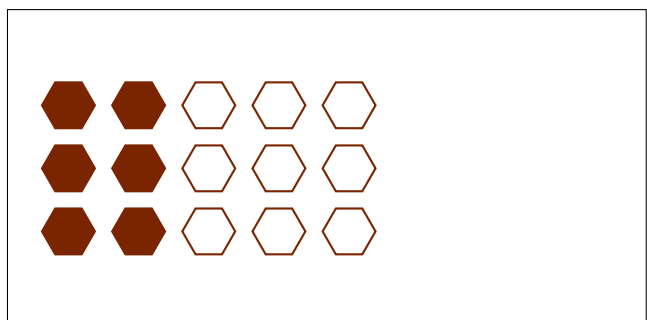
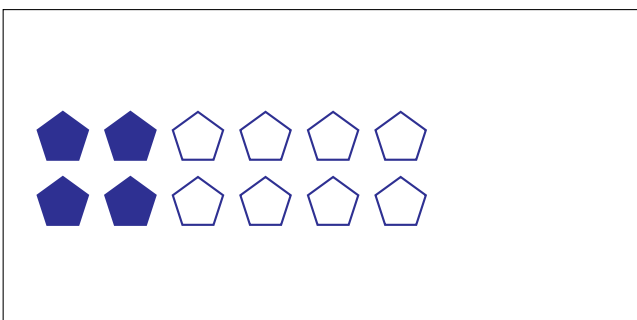
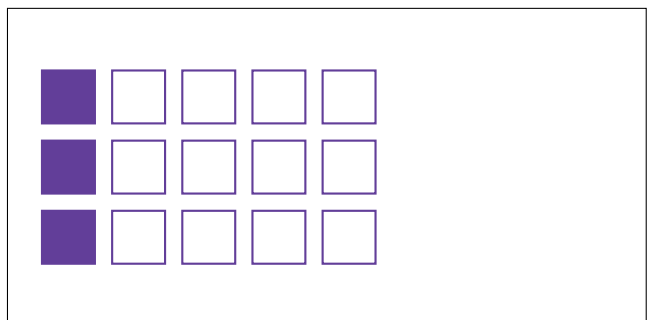

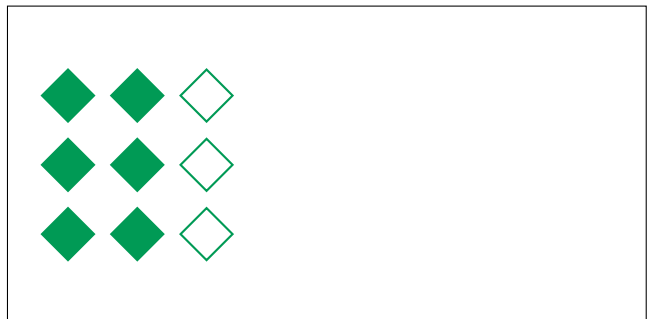
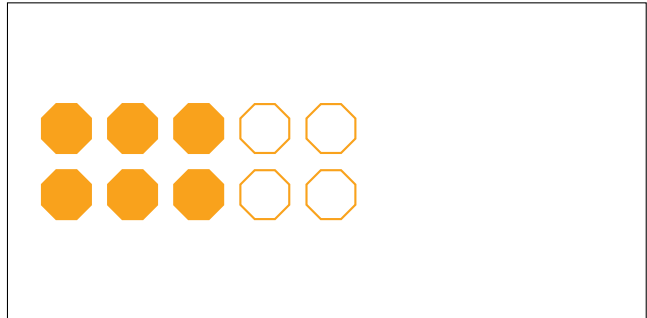

# Partes de Un Grupo (D)



En este grupo  
hay 10 formas y  
2 están rellenas.

$$\frac{2 \text{ formas rellenas}}{10 \text{ formas en el grupo}} = \frac{2}{10} = \frac{1}{5}$$

Escriba una fracción para cada uno de los modelos siguientes.



# Partes de Un Grupo (D) Respuestas



En este grupo  
hay 10 formas y  
2 están rellenas.

$$\frac{2 \text{ formas rellenas}}{10 \text{ formas en el grupo}} = \frac{2}{10} = \frac{1}{5}$$

Escriba una fracción para cada uno de los modelos siguientes.




$$\frac{4}{5}$$




$$\frac{6}{10} = \frac{3}{5}$$



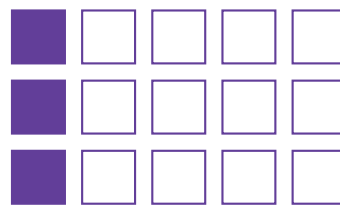
$$\frac{1}{2}$$



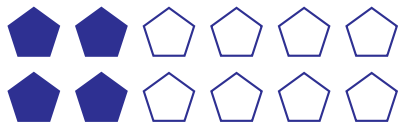
$$\frac{6}{9} = \frac{2}{3}$$




$$\frac{18}{24} = \frac{3}{4}$$



$$\frac{3}{15} = \frac{1}{5}$$



$$\frac{4}{12} = \frac{1}{3}$$



$$\frac{6}{15} = \frac{2}{5}$$