



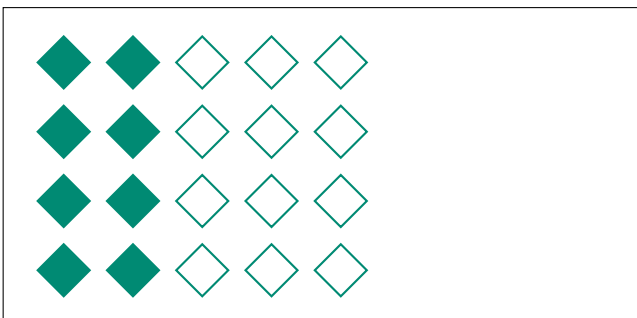
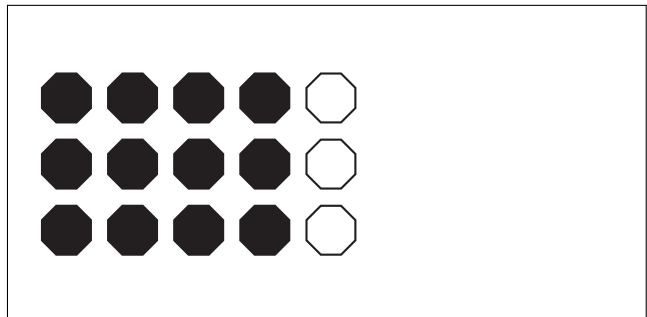

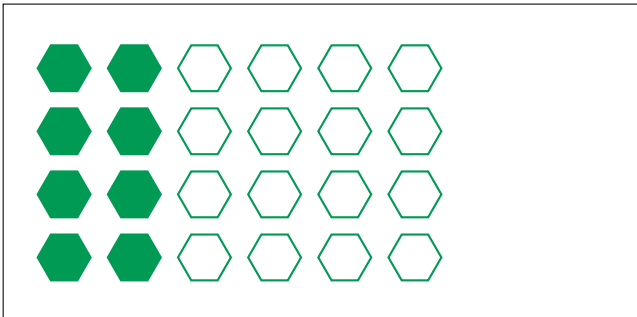
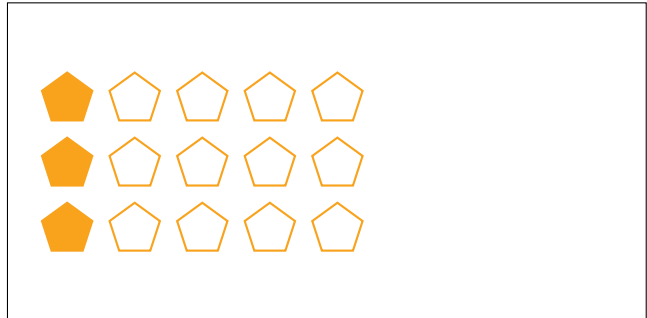

Partes de Un Grupo (E)




En este grupo
hay 20 formas y
5 están rellenas.

$$\frac{5 \text{ formas rellenas}}{20 \text{ formas en el grupo}} = \frac{5}{20} = \frac{1}{4}$$

Escriba una fracción para cada uno de los modelos siguientes.



Partes de Un Grupo (E) Respuestas



En este grupo hay 20 formas y 5 están rellenas.

$$\frac{5 \text{ formas rellenas}}{20 \text{ formas en el grupo}} = \frac{5}{20} = \frac{1}{4}$$

Escriba una fracción para cada uno de los modelos siguientes.

$$\frac{12}{18} = \frac{2}{3}$$

$$\frac{3}{15} = \frac{1}{5}$$

$$\frac{8}{24} = \frac{1}{3}$$

$$\frac{9}{15} = \frac{3}{5}$$

$$\frac{8}{16} = \frac{1}{2}$$

$$\frac{12}{15} = \frac{4}{5}$$

$$\frac{8}{20} = \frac{2}{5}$$

$$\frac{6}{8} = \frac{3}{4}$$