

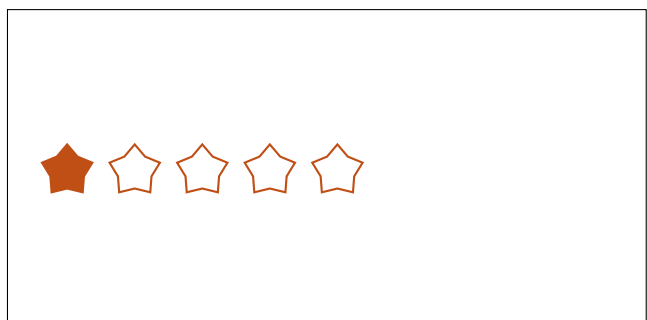
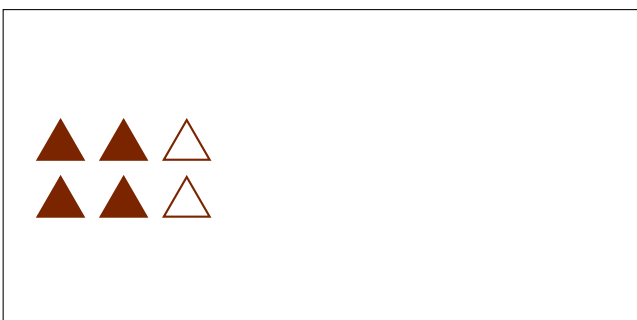

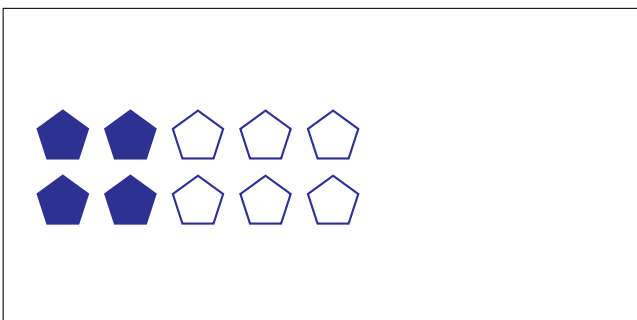

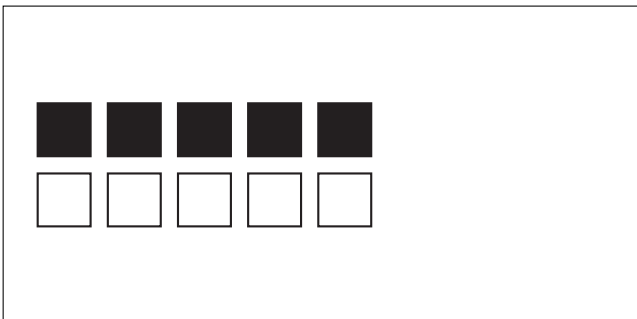

# Partes de Un Grupo (I)



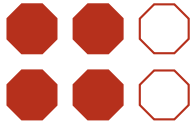
En este grupo  
hay 6 formas y  
4 están rellenas.

$$\frac{4 \text{ formas rellenas}}{6 \text{ formas en el grupo}} = \frac{4}{6} = \frac{2}{3}$$

Escriba una fracción para cada uno de los modelos siguientes.



# Partes de Un Grupo (I) Respuestas




En este grupo  
hay 6 formas y  
4 están rellenas.

$$\frac{4 \text{ formas rellenas}}{6 \text{ formas en el grupo}} = \frac{4}{6} = \frac{2}{3}$$


Escriba una fracción para cada uno de los modelos siguientes.




$$\frac{6}{10} = \frac{3}{5}$$



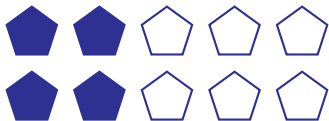
$$\frac{6}{24} = \frac{1}{4}$$




$$\frac{5}{10} = \frac{1}{2}$$



$$\frac{5}{15} = \frac{1}{3}$$



$$\frac{4}{10} = \frac{2}{5}$$



$$\frac{12}{15} = \frac{4}{5}$$



$$\frac{4}{6} = \frac{2}{3}$$



$$\frac{1}{5}$$