



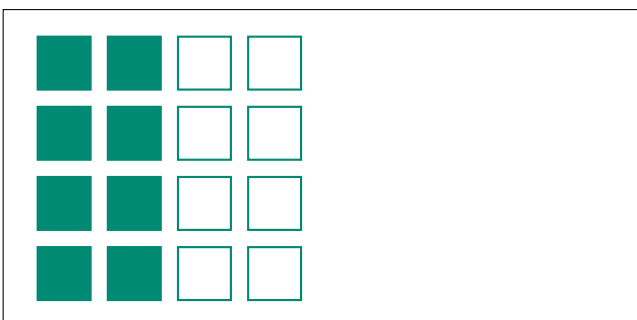

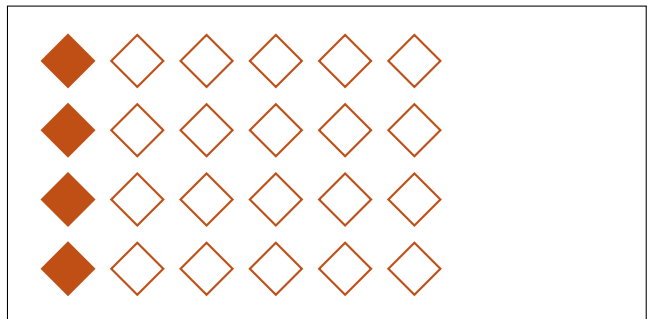

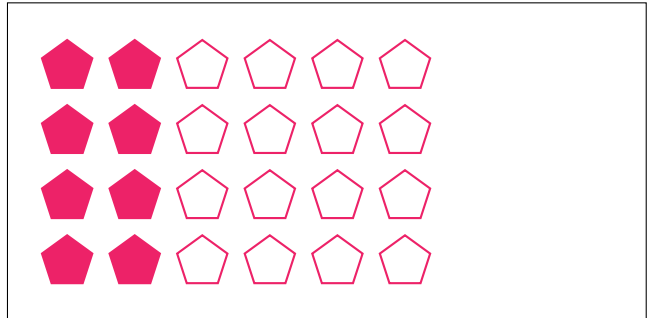
Partes de Un Grupo (C)




En este grupo
hay 24 formas y
16 están rellenas.

$$\frac{16 \text{ formas rellenas}}{24 \text{ formas en el grupo}} = \frac{16}{24} = \frac{2}{3}$$

Escriba una fracción para cada uno de los modelos siguientes.




Partes de Un Grupo (C) Respuestas




En este grupo
hay 24 formas y
16 están rellenas.

$$\frac{16 \text{ formas rellenas}}{24 \text{ formas en el grupo}} = \frac{16}{24} = \frac{2}{3}$$


Escriba una fracción para cada uno de los modelos siguientes.




$$\frac{6}{9} = \frac{2}{3}$$



$$\frac{8}{24} = \frac{1}{3}$$



$$\frac{9}{15} = \frac{3}{5}$$




$$\frac{4}{24} = \frac{1}{6}$$




$$\frac{15}{18} = \frac{5}{6}$$



$$\frac{1}{5}$$



$$\frac{8}{16} = \frac{1}{2}$$



$$\frac{4}{16} = \frac{1}{4}$$