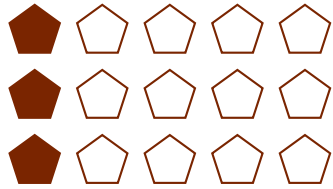



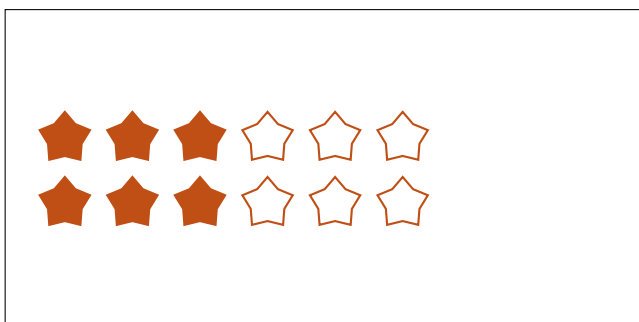

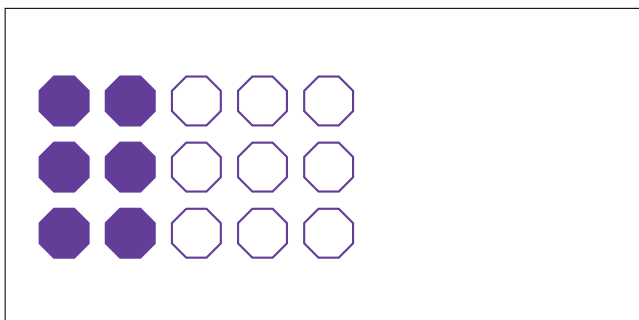

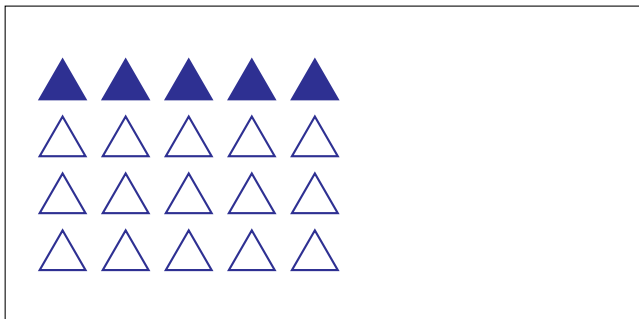
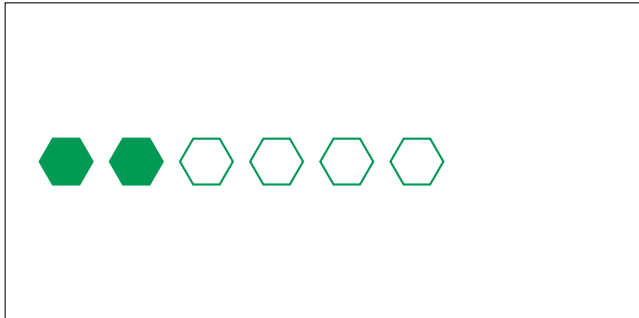
Partes de Un Grupo (G)



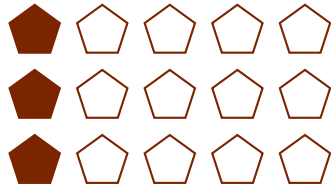
En este grupo
hay 15 formas y
3 están rellenas.

$$\frac{3 \text{ formas rellenas}}{15 \text{ formas en el grupo}} = \frac{3}{15} = \frac{1}{5}$$

Escriba una fracción para cada uno de los modelos siguientes.



Partes de Un Grupo (G) Respuestas




En este grupo
hay 15 formas y
3 están rellenas.

$$\frac{3 \text{ formas rellenas}}{15 \text{ formas en el grupo}} = \frac{3}{15} = \frac{1}{5}$$


Escriba una fracción para cada uno de los modelos siguientes.




$$\frac{2}{6} = \frac{1}{3}$$




$$\frac{8}{10} = \frac{4}{5}$$



$$\frac{5}{20} = \frac{1}{4}$$



$$\frac{20}{24} = \frac{5}{6}$$




$$\frac{6}{15} = \frac{2}{5}$$



$$\frac{1}{6}$$



$$\frac{6}{12} = \frac{1}{2}$$



$$\frac{12}{18} = \frac{2}{3}$$