


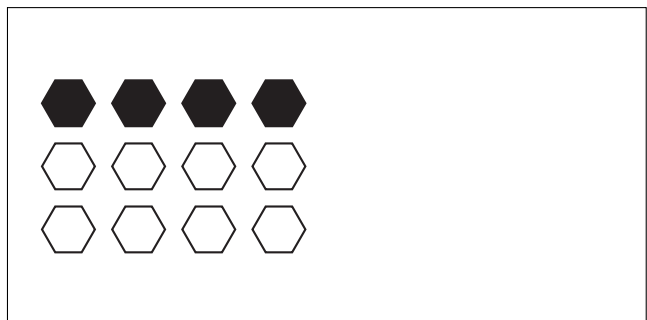

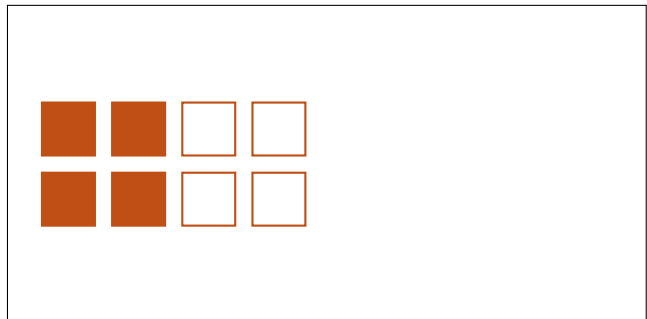
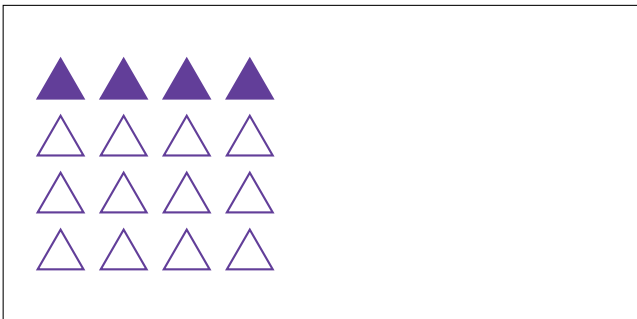
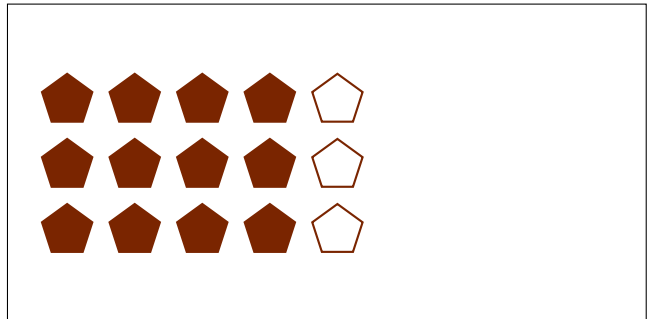
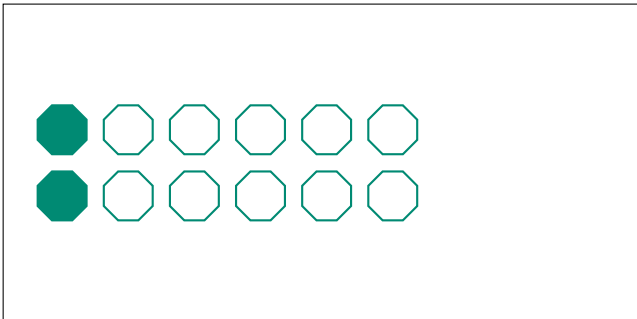


Partes de Un Grupo (J)




En este grupo
hay 18 formas y
9 están rellenas.

$$\frac{9 \text{ formas rellenas}}{18 \text{ formas en el grupo}} = \frac{9}{18} = \frac{1}{2}$$

Escriba una fracción para cada uno de los modelos siguientes.




Partes de Un Grupo (J) Respuestas




En este grupo
hay 18 formas y
9 están rellenas.

$$\frac{9 \text{ formas rellenas}}{18 \text{ formas en el grupo}} = \frac{9}{18} = \frac{1}{2}$$

Escriba una fracción para cada uno de los modelos siguientes.




$$\frac{15}{18} = \frac{5}{6}$$




$$\frac{16}{24} = \frac{2}{3}$$



$$\frac{2}{12} = \frac{1}{6}$$



$$\frac{12}{15} = \frac{4}{5}$$




$$\frac{4}{16} = \frac{1}{4}$$



$$\frac{4}{8} = \frac{1}{2}$$



$$\frac{3}{15} = \frac{1}{5}$$



$$\frac{4}{12} = \frac{1}{3}$$