

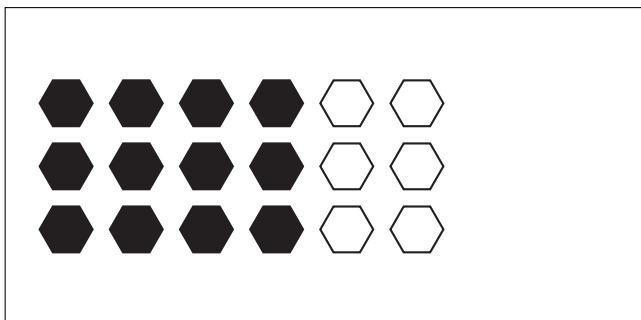
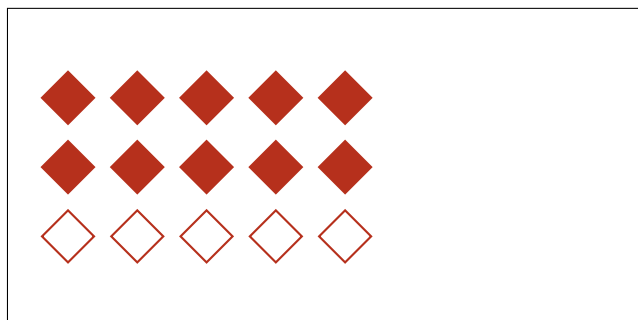

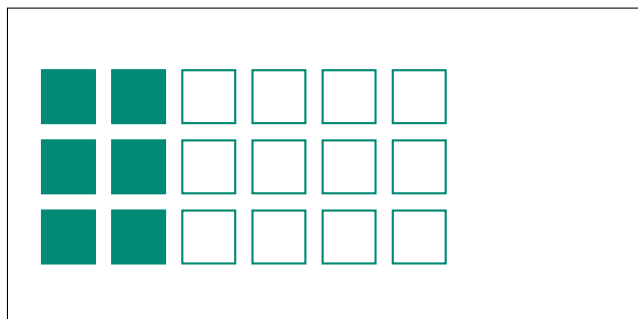

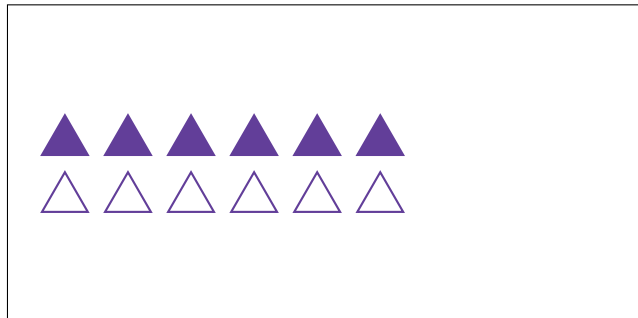
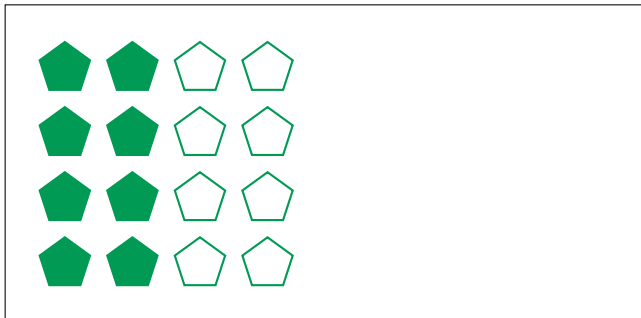
Partes de Un Grupo (D)




En este grupo
hay 9 formas y
3 están rellenas.

$$\frac{3 \text{ formas rellenas}}{9 \text{ formas en el grupo}} = \frac{3}{9} = \frac{1}{3}$$

Escriba una fracción para cada uno de los modelos siguientes.




Partes de Un Grupo (D) Respuestas



En este grupo
hay 9 formas y
3 están rellenas.

$$\frac{3 \text{ formas rellenas}}{9 \text{ formas en el grupo}} = \frac{3}{9} = \frac{1}{3}$$

Escriba una fracción para cada uno de los modelos siguientes.




$$\frac{8}{16} = \frac{1}{2}$$




$$\frac{6}{12} = \frac{1}{2}$$




$$\frac{1}{3}$$



$$\frac{6}{18} = \frac{1}{3}$$



$$\frac{5}{15} = \frac{1}{3}$$



$$\frac{10}{15} = \frac{2}{3}$$



$$\frac{12}{18} = \frac{2}{3}$$



$$\frac{10}{20} = \frac{1}{2}$$