



Modelar Cuartos (H)

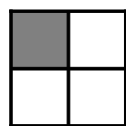
Escriba la fracción correcta para cada modelo.



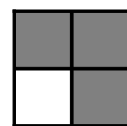
$$\frac{2}{4}$$




$$\frac{2}{4}$$




$$\frac{1}{4}$$



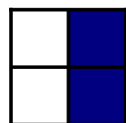
$$\frac{2}{4}$$



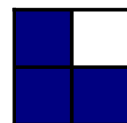
$$\frac{4}{4}$$




$$\frac{4}{4}$$




$$\frac{2}{4}$$



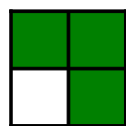
$$\frac{2}{4}$$



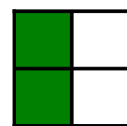
$$\frac{4}{4}$$




$$\frac{2}{4}$$




$$\frac{2}{4}$$




$$\frac{2}{4}$$




$$\frac{1}{4}$$




$$\frac{2}{4}$$



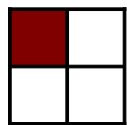
$$\frac{2}{4}$$




$$\frac{4}{4}$$



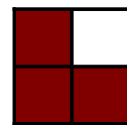
$$\frac{4}{4}$$




$$\frac{1}{4}$$




$$\frac{4}{4}$$




$$\frac{2}{4}$$




$$\frac{4}{4}$$




$$\frac{2}{4}$$




$$\frac{1}{4}$$




$$\frac{2}{4}$$




$$\frac{4}{4}$$



$$\frac{2}{4}$$




$$\frac{2}{4}$$




$$\frac{4}{4}$$

Modelar Cuartos (H) Respuestas

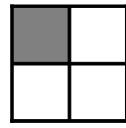
Escriba la fracción correcta para cada modelo.



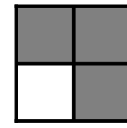
$$\frac{2}{4}$$




$$\frac{3}{4}$$




$$\frac{1}{4}$$



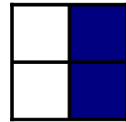
$$\frac{3}{4}$$




$$\frac{4}{4}$$




$$\frac{4}{4}$$




$$\frac{2}{4}$$



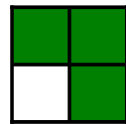
$$\frac{3}{4}$$



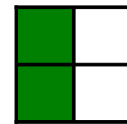
$$\frac{4}{4}$$




$$\frac{3}{4}$$




$$\frac{3}{4}$$



$$\frac{2}{4}$$




$$\frac{1}{4}$$




$$\frac{2}{4}$$



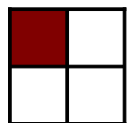
$$\frac{2}{4}$$




$$\frac{4}{4}$$



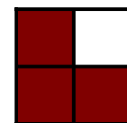
$$\frac{4}{4}$$




$$\frac{1}{4}$$




$$\frac{4}{4}$$




$$\frac{3}{4}$$




$$\frac{4}{4}$$




$$\frac{3}{4}$$




$$\frac{1}{4}$$




$$\frac{2}{4}$$




$$\frac{4}{4}$$



$$\frac{3}{4}$$



$$\frac{2}{4}$$



$$\frac{4}{4}$$