
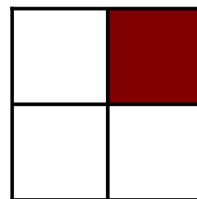


Modelar Cuartos (A)

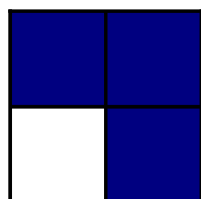
Escriba la fracción correcta para cada modelo.



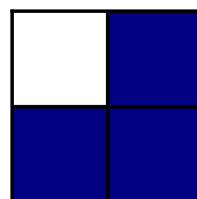
$$\frac{3}{4}$$



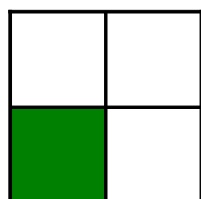
$$\frac{1}{4}$$



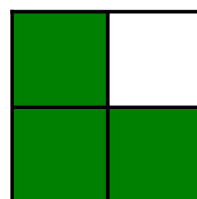
$$\frac{3}{4}$$




$$\frac{3}{4}$$




$$\frac{1}{4}$$



$$\frac{3}{4}$$




$$\frac{4}{4}$$



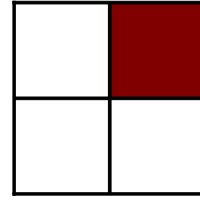
$$\frac{4}{4}$$

Modelar Cuartos (A) Respuestas


Escriba la fracción correcta para cada modelo.



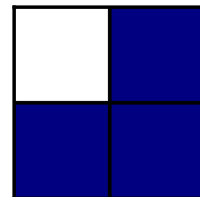
$$\frac{3}{4}$$




$$\frac{1}{4}$$




$$\frac{3}{4}$$




$$\frac{3}{4}$$




$$\frac{1}{4}$$



$$\frac{3}{4}$$




$$\frac{4}{4}$$



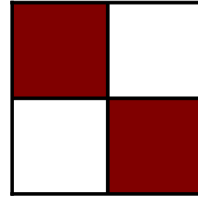
$$\frac{4}{4}$$

Modelar Cuartos (B)


Escriba la fracción correcta para cada modelo.




$$\frac{1}{4}$$




$$\frac{4}{4}$$



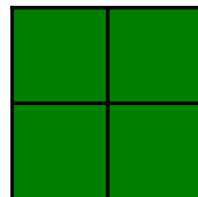
$$\frac{\quad}{\quad}$$




$$\frac{\quad}{\quad}$$




$$\frac{\quad}{\quad}$$



$$\frac{\quad}{\quad}$$




$$\frac{\quad}{\quad}$$



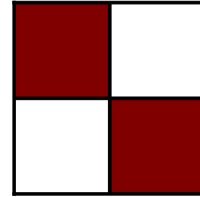
$$\frac{\quad}{\quad}$$

Modelar Cuartos (B) Respuestas


Escriba la fracción correcta para cada modelo.




$$\frac{1}{4}$$




$$\frac{2}{4}$$



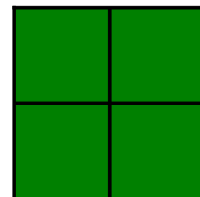
$$\frac{2}{4}$$



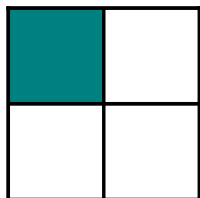
$$\frac{2}{4}$$




$$\frac{1}{4}$$



$$\frac{4}{4}$$



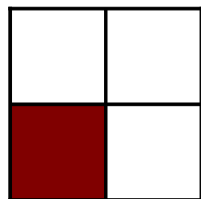
$$\frac{1}{4}$$



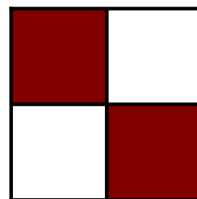
$$\frac{2}{4}$$

Modelar Cuartos (C)


Escriba la fracción correcta para cada modelo.




$$\frac{1}{4}$$




$$\frac{4}{4}$$




$$\frac{2}{4}$$




$$\frac{4}{4}$$




$$\frac{4}{4}$$



$$\frac{1}{4}$$



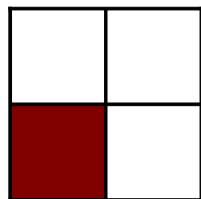
$$\frac{2}{4}$$



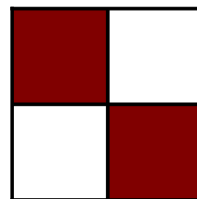
$$\frac{2}{4}$$

Modelar Cuartos (C) Respuestas


Escriba la fracción correcta para cada modelo.




$$\frac{1}{4}$$




$$\frac{2}{4}$$




$$\frac{2}{4}$$




$$\frac{4}{4}$$




$$\frac{4}{4}$$



$$\frac{1}{4}$$




$$\frac{2}{4}$$




$$\frac{3}{4}$$

Modelar Cuartos (D)


Escriba la fracción correcta para cada modelo.



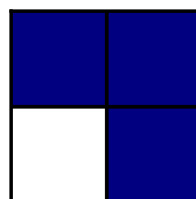
$$\frac{4}{4}$$



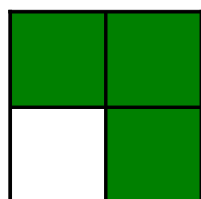
$$\frac{4}{4}$$




$$\frac{\quad}{\quad}$$




$$\frac{\quad}{\quad}$$




$$\frac{\quad}{\quad}$$



$$\frac{\quad}{\quad}$$




$$\frac{\quad}{\quad}$$




$$\frac{\quad}{\quad}$$

Modelar Cuartos (D) Respuestas


Escriba la fracción correcta para cada modelo.



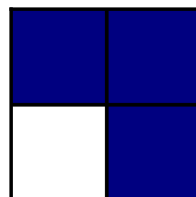
$$\frac{4}{4}$$




$$\frac{2}{4}$$



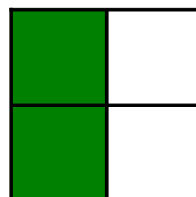
$$\frac{4}{4}$$




$$\frac{3}{4}$$




$$\frac{3}{4}$$



$$\frac{2}{4}$$




$$\frac{2}{4}$$



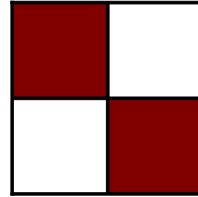
$$\frac{4}{4}$$

Modelar Cuartos (E)


Escriba la fracción correcta para cada modelo.




$$\frac{1}{4}$$




$$\frac{2}{4}$$



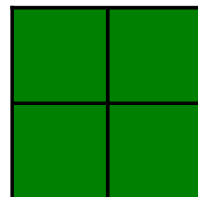
$$\frac{3}{4}$$




$$\frac{4}{4}$$




$$\frac{4}{4}$$



$$\frac{4}{4}$$



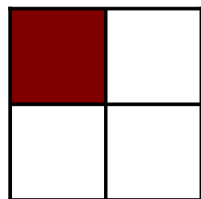
$$\frac{1}{4}$$



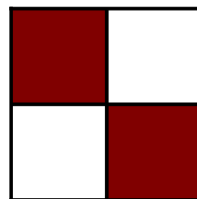
$$\frac{3}{4}$$

Modelar Cuartos (E) Respuestas


Escriba la fracción correcta para cada modelo.




$$\frac{1}{4}$$




$$\frac{2}{4}$$



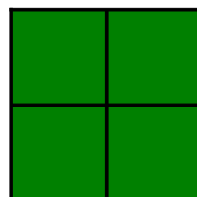
$$\frac{3}{4}$$



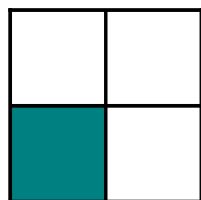
$$\frac{4}{4}$$




$$\frac{4}{4}$$



$$\frac{4}{4}$$



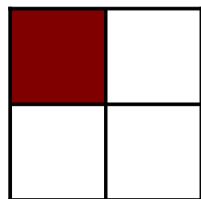
$$\frac{1}{4}$$



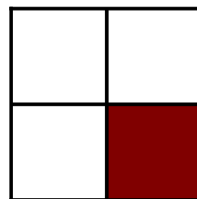
$$\frac{3}{4}$$

Modelar Cuartos (F)


Escriba la fracción correcta para cada modelo.



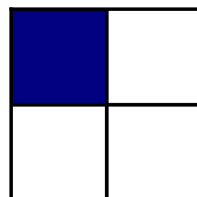
$$\frac{1}{4}$$




$$\frac{1}{4}$$




$$\frac{3}{4}$$




$$\frac{1}{4}$$




$$\frac{1}{4}$$



$$\frac{1}{4}$$




$$\frac{1}{4}$$



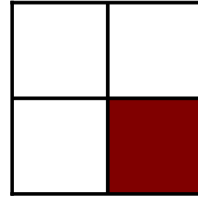
$$\frac{1}{4}$$

Modelar Cuartos (F) Respuestas


Escriba la fracción correcta para cada modelo.




$$\frac{1}{4}$$




$$\frac{1}{4}$$




$$\frac{3}{4}$$




$$\frac{1}{4}$$




$$\frac{1}{4}$$



$$\frac{1}{4}$$



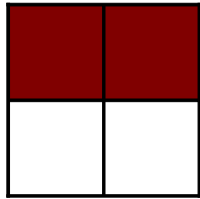
$$\frac{1}{4}$$




$$\frac{1}{4}$$

Modelar Cuartos (G)


Escriba la fracción correcta para cada modelo.



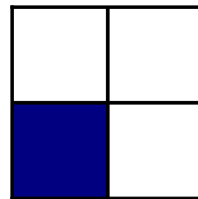
$$\frac{2}{4}$$




$$\frac{4}{4}$$




$$\frac{3}{4}$$




$$\frac{1}{4}$$




$$\frac{1}{4}$$



$$\frac{2}{4}$$



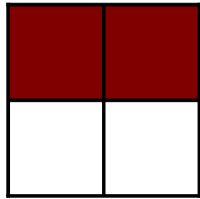
$$\frac{2}{4}$$




$$\frac{1}{4}$$

Modelar Cuartos (G) Respuestas


Escriba la fracción correcta para cada modelo.



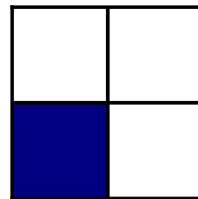
$$\frac{2}{4}$$




$$\frac{4}{4}$$




$$\frac{3}{4}$$




$$\frac{1}{4}$$




$$\frac{1}{4}$$



$$\frac{2}{4}$$




$$\frac{3}{4}$$



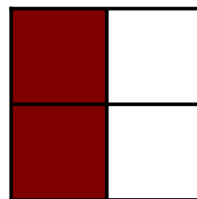
$$\frac{1}{4}$$

Modelar Cuartos (H)


Escriba la fracción correcta para cada modelo.




$$\frac{2}{4}$$




$$\frac{4}{4}$$



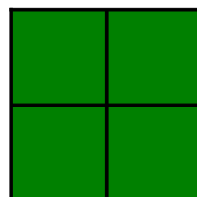
$$\frac{\quad}{\quad}$$




$$\frac{\quad}{\quad}$$




$$\frac{\quad}{\quad}$$



$$\frac{\quad}{\quad}$$




$$\frac{\quad}{\quad}$$



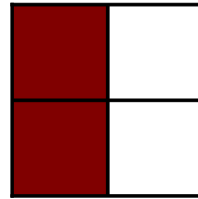
$$\frac{\quad}{\quad}$$

Modelar Cuartos (H) Respuestas


Escriba la fracción correcta para cada modelo.




$$\frac{2}{4}$$




$$\frac{2}{4}$$



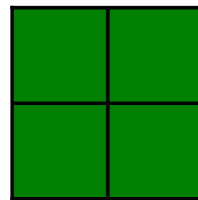
$$\frac{4}{4}$$




$$\frac{4}{4}$$




$$\frac{2}{4}$$



$$\frac{4}{4}$$




$$\frac{1}{4}$$




$$\frac{4}{4}$$

Modelar Cuartos (I)


Escriba la fracción correcta para cada modelo.




$$\frac{1}{4}$$




$$\frac{4}{4}$$




$$\frac{\quad}{\quad}$$




$$\frac{\quad}{\quad}$$




$$\frac{\quad}{\quad}$$



$$\frac{\quad}{\quad}$$




$$\frac{\quad}{\quad}$$




$$\frac{\quad}{\quad}$$

Modelar Cuartos (I) Respuestas


Escriba la fracción correcta para cada modelo.




$$\frac{1}{4}$$




$$\frac{4}{4}$$




$$\frac{1}{4}$$




$$\frac{3}{4}$$




$$\frac{1}{4}$$



$$\frac{3}{4}$$




$$\frac{4}{4}$$



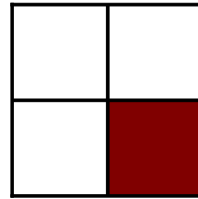
$$\frac{3}{4}$$

Modelar Cuartos (J)


Escriba la fracción correcta para cada modelo.



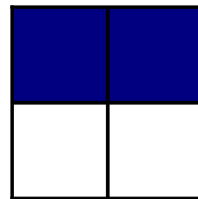
$$\frac{2}{4}$$




$$\frac{1}{4}$$



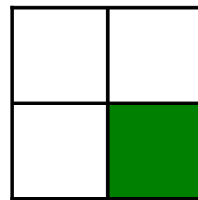
$$\frac{\quad}{\quad}$$




$$\frac{\quad}{\quad}$$




$$\frac{\quad}{\quad}$$



$$\frac{\quad}{\quad}$$



$$\frac{\quad}{\quad}$$



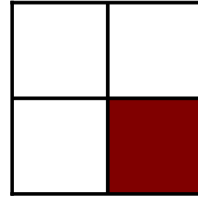
$$\frac{\quad}{\quad}$$

Modelar Cuartos (J) Respuestas


Escriba la fracción correcta para cada modelo.



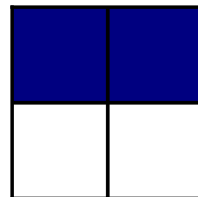
$$\frac{2}{4}$$




$$\frac{1}{4}$$




$$\frac{4}{4}$$



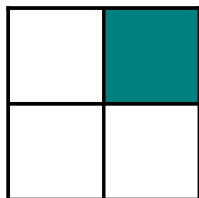
$$\frac{2}{4}$$




$$\frac{1}{4}$$



$$\frac{1}{4}$$



$$\frac{1}{4}$$



$$\frac{1}{4}$$