


Modelar Quintos (D)

Instrucciones: Escriba el Numerador Correcto




$$\frac{3}{5}$$




$$\frac{\quad}{5}$$



$$\frac{\quad}{5}$$




$$\frac{\quad}{5}$$




$$\frac{\quad}{5}$$



$$\frac{\quad}{5}$$



$$\frac{\quad}{5}$$




$$\frac{\quad}{5}$$



$$\frac{\quad}{5}$$

Modelar Quintos (D) Respuestas

Instrucciones: Escriba el Numerador Correcto




$$\frac{3}{5}$$




$$\frac{3}{5}$$



$$\frac{4}{5}$$




$$\frac{2}{5}$$




$$\frac{1}{5}$$



$$\frac{3}{5}$$



$$\frac{5}{5}$$



$$\frac{2}{5}$$



$$\frac{3}{5}$$