

Modelando Quintos (B)

Instrucciones: Modele las fracciones coloreando. Intente colorear fracciones similares de formas diferentes.

$$\frac{2}{5}$$

$$\frac{4}{5}$$

$$\frac{1}{5}$$

$$\frac{1}{5}$$

$$\frac{2}{5}$$

$$\frac{2}{5}$$


$$\frac{1}{5}$$

$$\frac{5}{5}$$

$$\frac{3}{5}$$

Modelando Quintos (B) Respuestas


Instrucciones: Modele las fracciones coloreando. Intente colorear fracciones similares de formas diferentes.



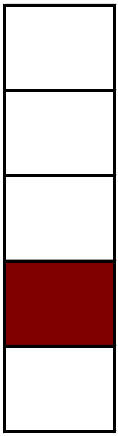
$$\frac{2}{5}$$




$$\frac{4}{5}$$




$$\frac{1}{5}$$




$$\frac{1}{5}$$



$$\frac{2}{5}$$




$$\frac{2}{5}$$



$$\frac{1}{5}$$



$$\frac{5}{5}$$



$$\frac{3}{5}$$