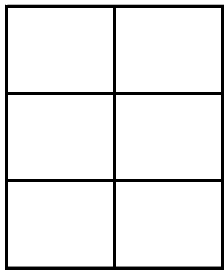
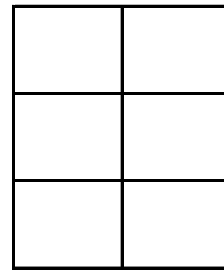


## Modelando Sextos (E)

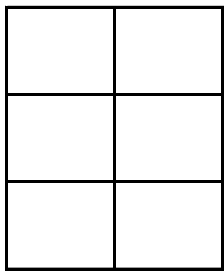
Instrucciones: Modele las fracciones coloreando. Intente colorear fracciones similares de formas diferentes.



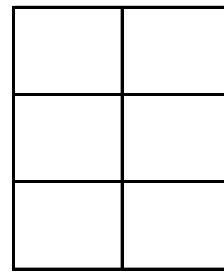
$$\frac{1}{6}$$



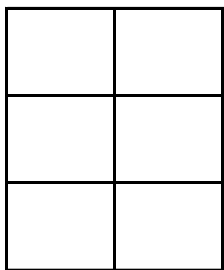
$$\frac{1}{6}$$



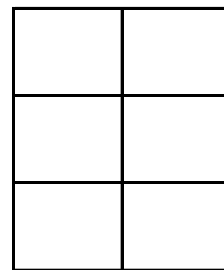
$$\frac{1}{6}$$



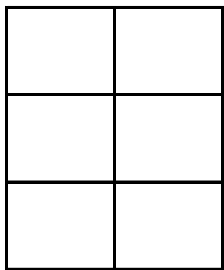
$$\frac{3}{6}$$



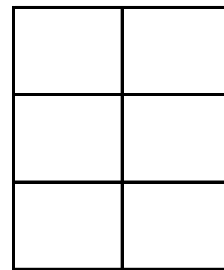
$$\frac{2}{6}$$



$$\frac{3}{6}$$




$$\frac{6}{6}$$




$$\frac{4}{6}$$

## Modelando Sextos (E) Respuestas


Instrucciones: Modele las fracciones coloreando. Intente colorear fracciones similares de formas diferentes.




$$\frac{1}{6}$$




$$\frac{1}{6}$$




$$\frac{1}{6}$$




$$\frac{3}{6}$$




$$\frac{2}{6}$$



$$\frac{3}{6}$$



$$\frac{6}{6}$$



$$\frac{4}{6}$$