


Modelar Mitades (A)




En este modelo
hay dos partes.
Una parte está
sombreada

$\frac{1}{2}$ parte sombreada
2 partes

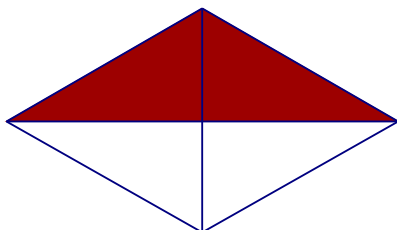
Para cada modelo, escriba una fracción que lo describa.




—




—




—



—




—



—


Modelar Mitades (A) Respuestas




En este modelo
hay dos partes.
Una parte está
sombreada

$\frac{1}{2}$ parte sombreada
 $\frac{2}{2}$ partes

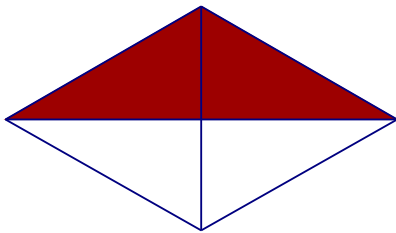
Para cada modelo, escriba una fracción que lo describa.




$\frac{1}{2}$




$\frac{0}{2}$




$\frac{1}{2}$



$\frac{1}{2}$



$\frac{2}{2}$



$\frac{1}{2}$