

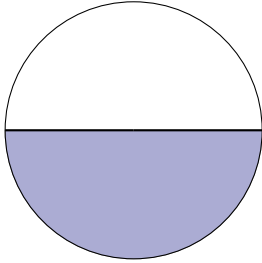
# Modelos de Fracciones Equivalentes (H)

Nombre: \_\_\_\_\_

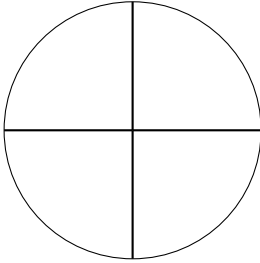
Fecha: \_\_\_\_\_

Coloreen el segundo modelo exactamente de la misma manera, y determinen las fracciones equivalentes.

1.

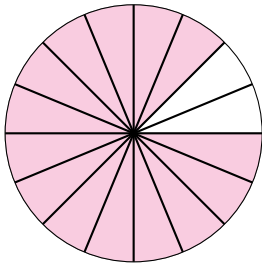


=

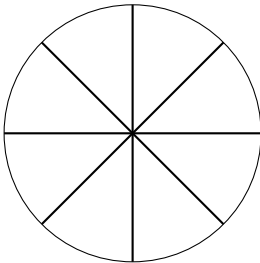


— = —

2.

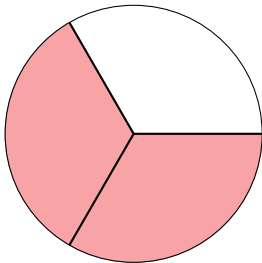


=

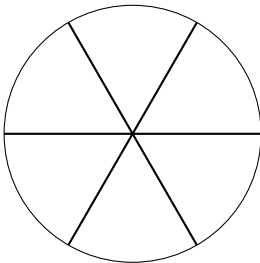


— = —

3.

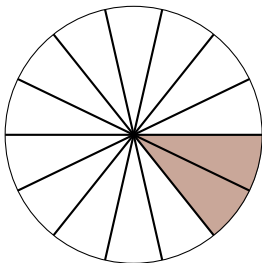


=

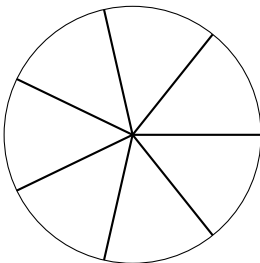


— = —

4.

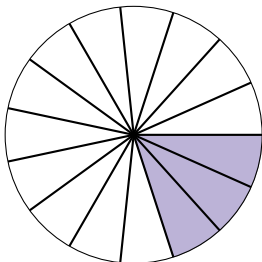


=

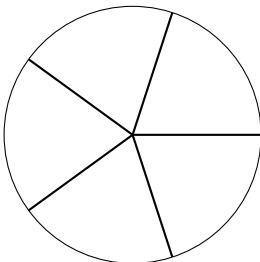


— = —

5.



=



— = —