

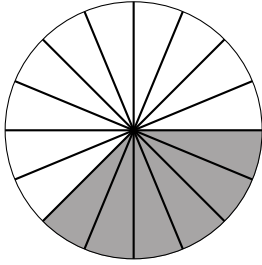
Modelos de Fracciones Equivalentes (G)

Nombre: _____

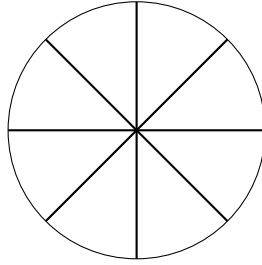
Fecha: _____

Coloreen el segundo modelo exactamente de la misma manera, y determinen las fracciones equivalentes.

1.

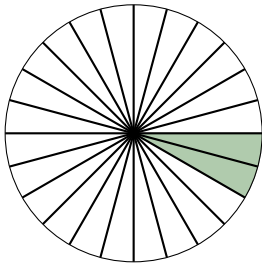


=

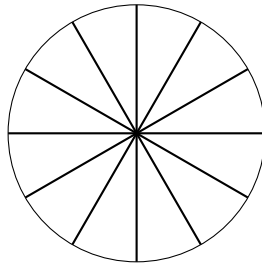


— = —

2.

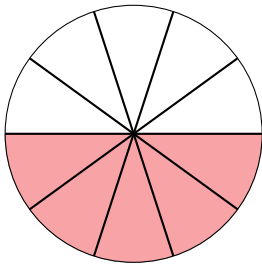


=

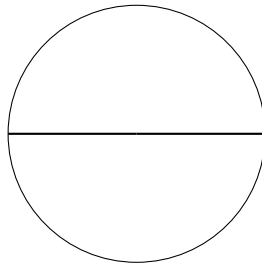


— = —

3.

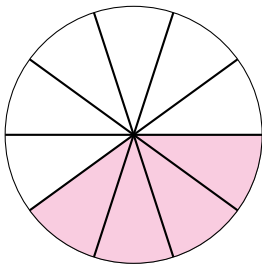


=

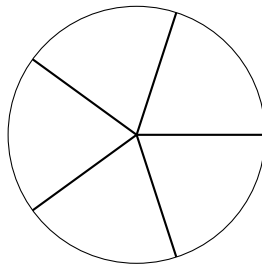


— = —

4.

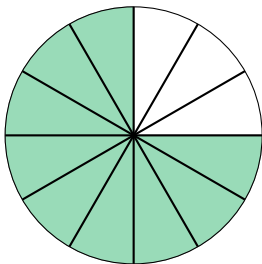


=

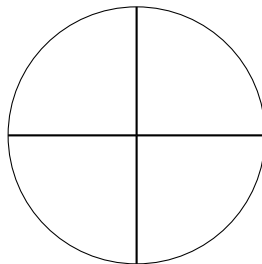


— = —

5.



=



— = —

Modelos de Fracciones Equivalentes (G) Respuestas

Nombre: _____

Fecha: _____

Coloreen el segundo modelo exactamente de la misma manera, y determinen las fracciones equivalentes.

