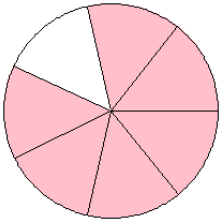


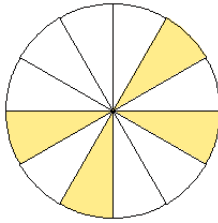
## Modelos de Fracciones (D)

¿Qué fracción se muestra en cada modelo?

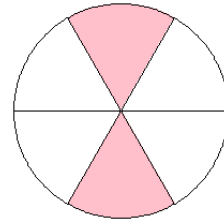
1.



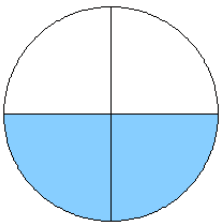
2.



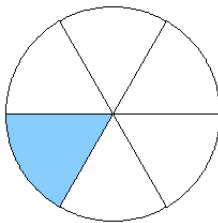
3.



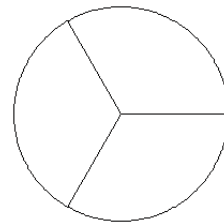
4.



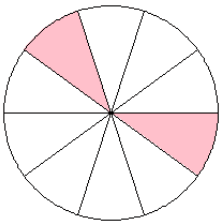
5.



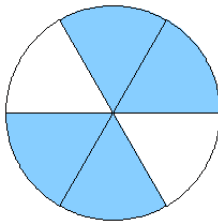
6.



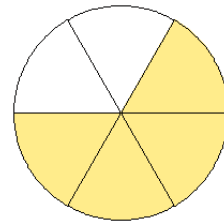
7.



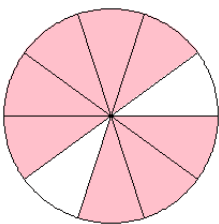
8.



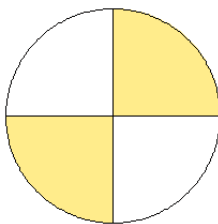
9.



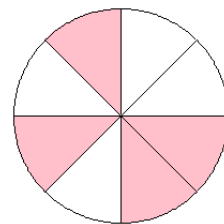
10.



11.



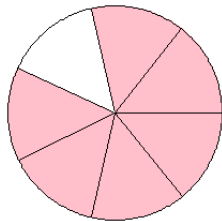
12.



# Modelos de Fracciones (D) Respuestas

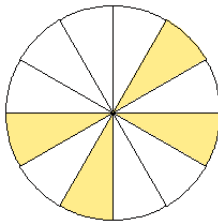
¿Qué fracción se muestra en cada modelo?

1.



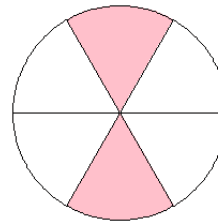
$$= \frac{6}{7}$$

2.



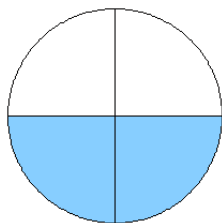
$$= \frac{4}{12}$$

3.



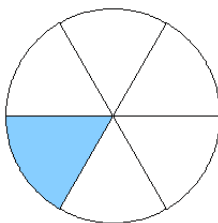
$$= \frac{2}{6}$$

4.



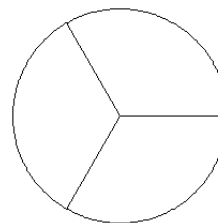
$$= \frac{2}{4}$$

5.



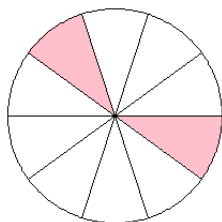
$$= \frac{1}{6}$$

6.



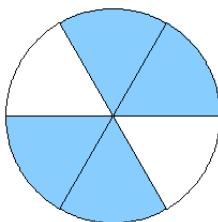
$$= \frac{0}{3}$$

7.



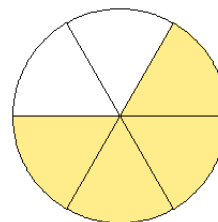
$$= \frac{2}{10}$$

8.



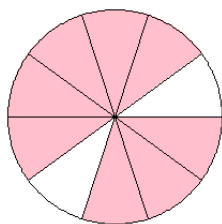
$$= \frac{4}{6}$$

9.



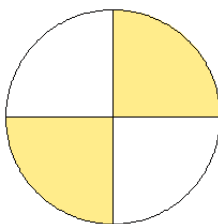
$$= \frac{4}{6}$$

10.



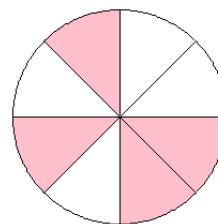
$$= \frac{8}{10}$$

11.



$$= \frac{2}{4}$$

12.



$$= \frac{4}{8}$$