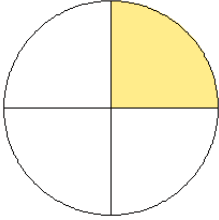


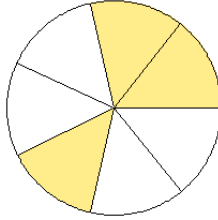
Modelos de Fracciones (E)

¿Qué fracción se muestra en cada modelo?

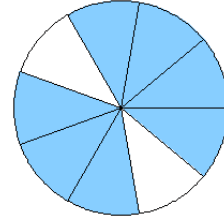
1.



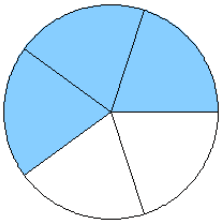
2.



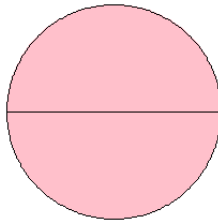
3.



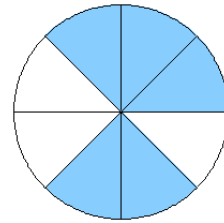
4.



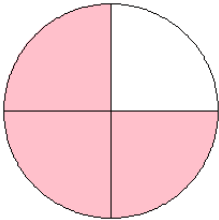
5.



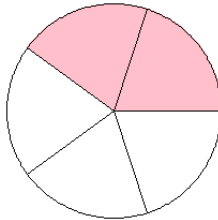
6.



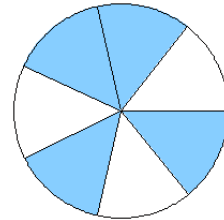
7.



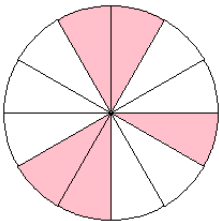
8.



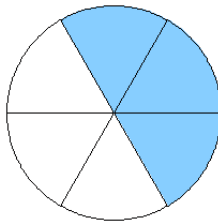
9.



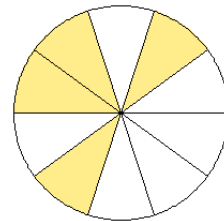
10.



11.



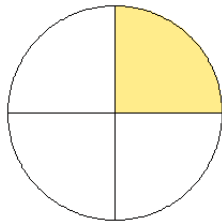
12.



Modelos de Fracciones (E) Respuestas

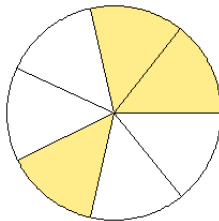
¿Qué fracción se muestra en cada modelo?

1.



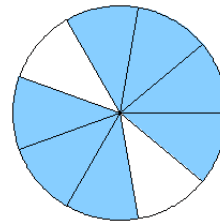
$$= \frac{1}{4}$$

2.



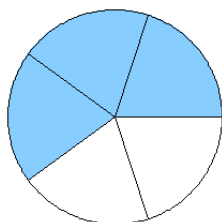
$$= \frac{3}{7}$$

3.



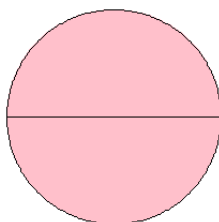
$$= \frac{7}{9}$$

4.



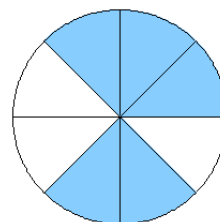
$$= \frac{3}{5}$$

5.



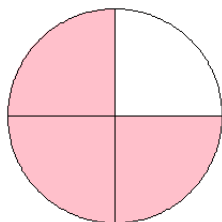
$$= \frac{2}{2}$$

6.



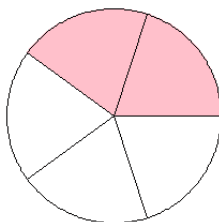
$$= \frac{5}{8}$$

7.



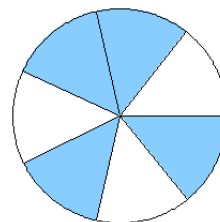
$$= \frac{3}{4}$$

8.



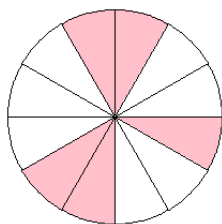
$$= \frac{2}{5}$$

9.



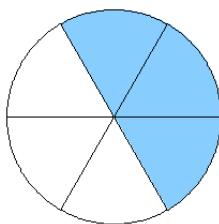
$$= \frac{4}{7}$$

10.



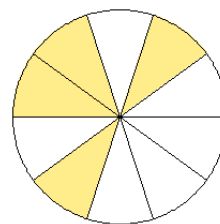
$$= \frac{5}{12}$$

11.



$$= \frac{3}{6}$$

12.



$$= \frac{4}{10}$$