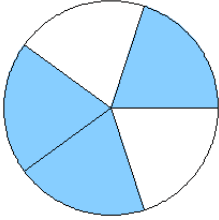


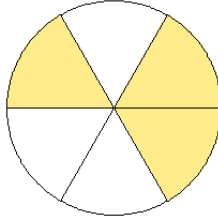
## Modelos de Fracciones (E)

¿Qué fracción se muestra en cada modelo?

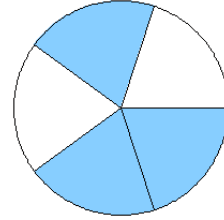
1.



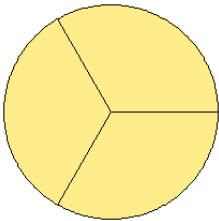
2.



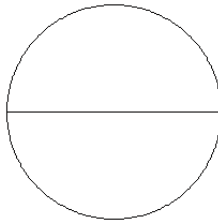
3.



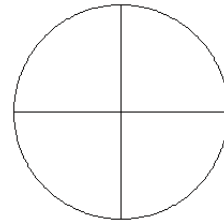
4.



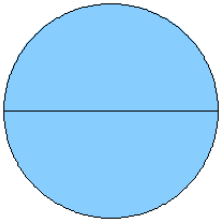
5.



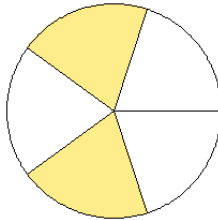
6.



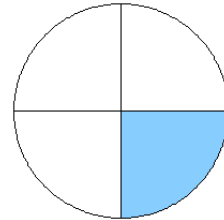
7.



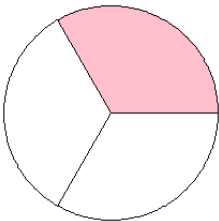
8.



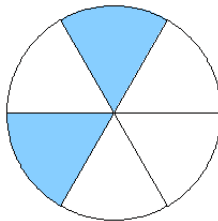
9.



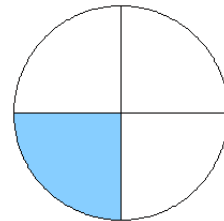
10.



11.



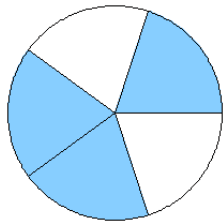
12.



# Modelos de Fracciones (E) Respuestas

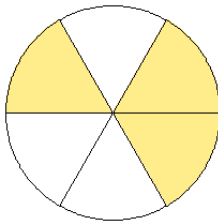
¿Qué fracción se muestra en cada modelo?

1.



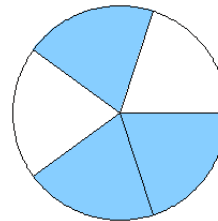
$$= \frac{3}{5}$$

2.



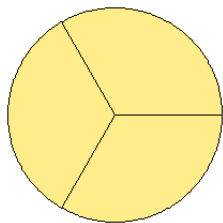
$$= \frac{3}{6}$$

3.



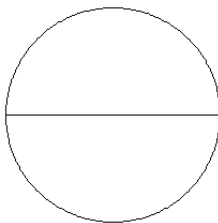
$$= \frac{3}{5}$$

4.



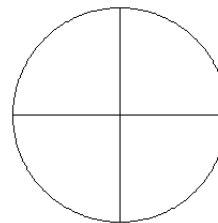
$$= \frac{3}{3}$$

5.




$$= \frac{0}{2}$$

6.



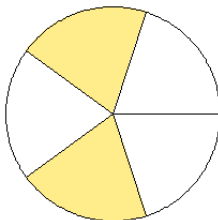
$$= \frac{0}{4}$$

7.



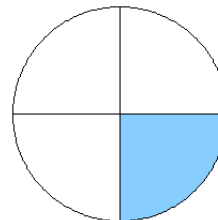
$$= \frac{2}{2}$$

8.



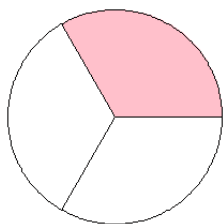
$$= \frac{2}{5}$$

9.



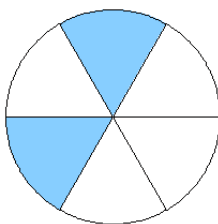
$$= \frac{1}{4}$$

10.



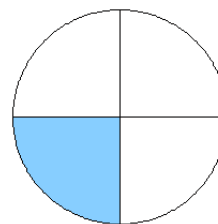
$$= \frac{1}{3}$$

11.



$$= \frac{2}{6}$$

12.



$$= \frac{1}{4}$$