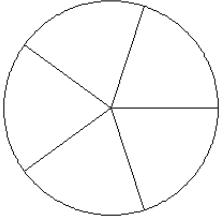


# Modelos de Fracciones (A)

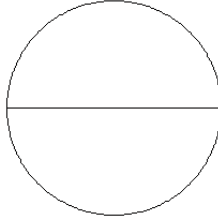
Coloree secciones de cada círculo para modelar cada fracción.

1.



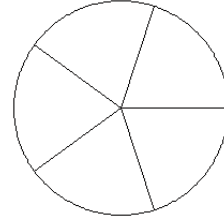
$$\frac{3}{5}$$

2.



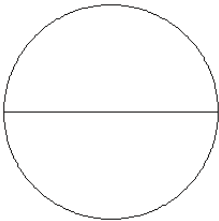
$$\frac{1}{2}$$

3.



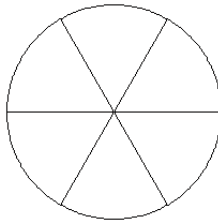
$$\frac{3}{5}$$

4.



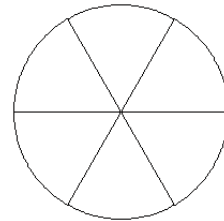
$$\frac{0}{2}$$

5.



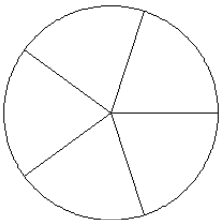
$$\frac{4}{6}$$

6.



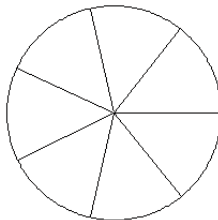
$$\frac{6}{6}$$

7.



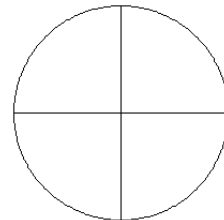
$$\frac{1}{5}$$

8.



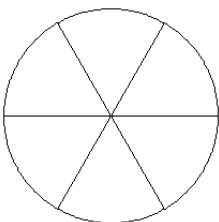
$$\frac{3}{7}$$

9.



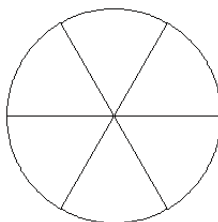
$$\frac{2}{4}$$

10.



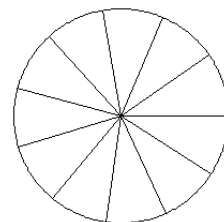
$$\frac{1}{6}$$

11.



$$\frac{3}{6}$$

12.

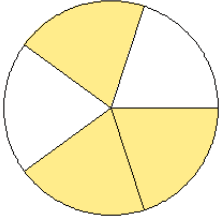


$$\frac{8}{11}$$

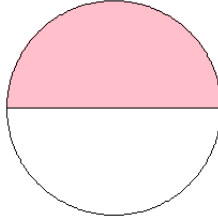
# Modelos de Fracciones (A) Respuestas

Coloree secciones de cada círculo para modelar cada fracción.

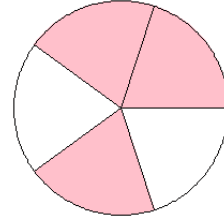
1.



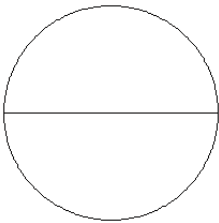
2.



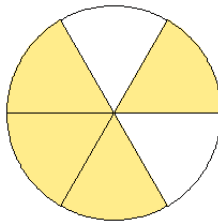
3.



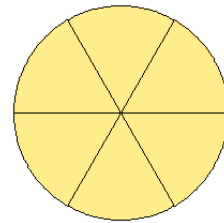
4.



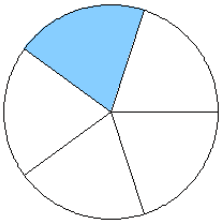
5.



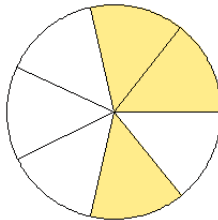
6.



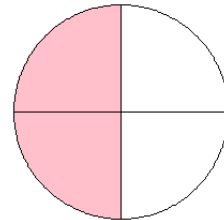
7.



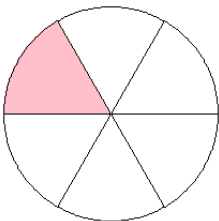
8.



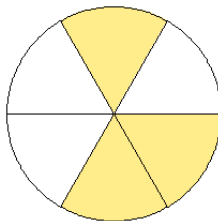
9.



10.



11.



12.

