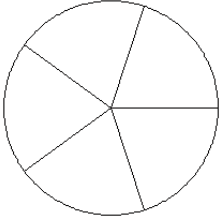


Modelos de Fracciones (B)

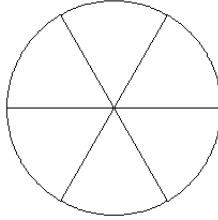
Coloree secciones de cada círculo para modelar cada fracción.

1.



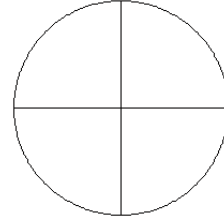
$$\frac{3}{5}$$

2.



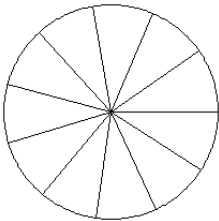
$$\frac{1}{6}$$

3.



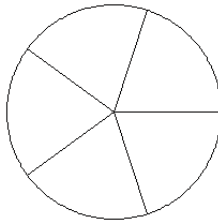
$$\frac{0}{4}$$

4.



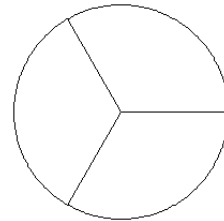
$$\frac{8}{11}$$

5.



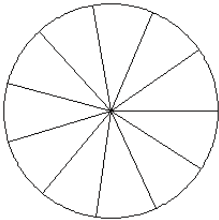
$$\frac{1}{5}$$

6.



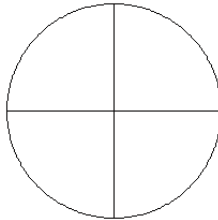
$$\frac{0}{3}$$

7.



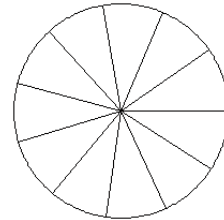
$$\frac{7}{11}$$

8.



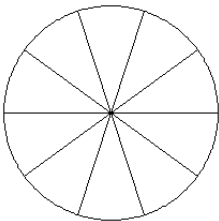
$$\frac{1}{4}$$

9.



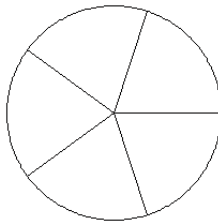
$$\frac{3}{11}$$

10.



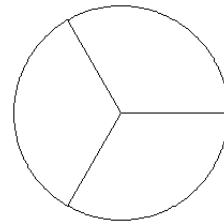
$$\frac{5}{10}$$

11.



$$\frac{1}{5}$$

12.

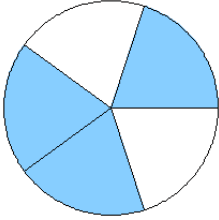


$$\frac{0}{3}$$

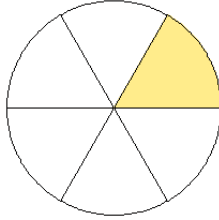
Modelos de Fracciones (B) Respuestas

Coloree secciones de cada círculo para modelar cada fracción.

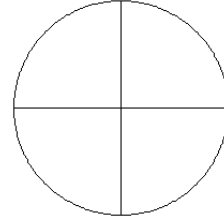
1.



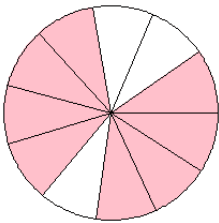
2.



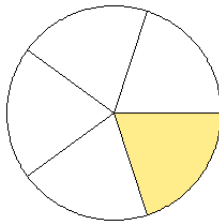
3.



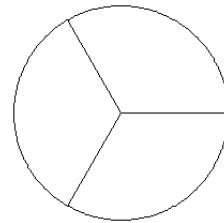
4.



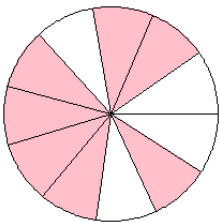
5.



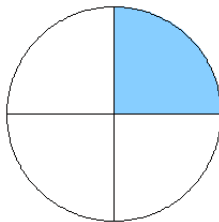
6.



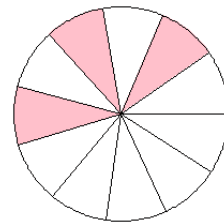
7.



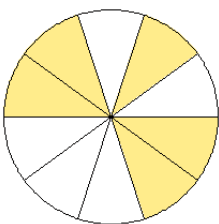
8.



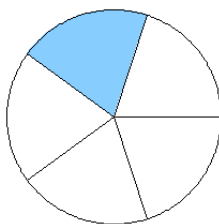
9.



10.



11.



12.

