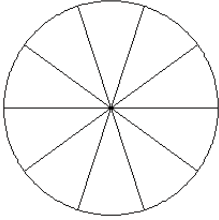


Modelos de Fracciones (D)

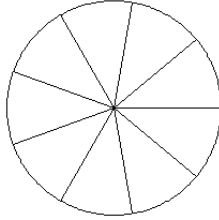
Coloree secciones de cada círculo para modelar cada fracción.

1.



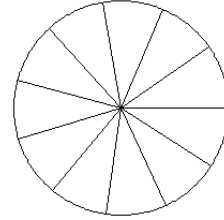
$$\frac{8}{10}$$

2.



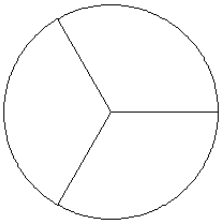
$$\frac{4}{9}$$

3.



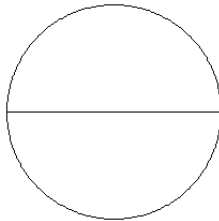
$$\frac{8}{11}$$

4.



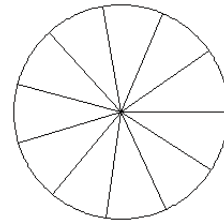
$$\frac{0}{3}$$

5.



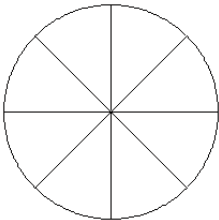
$$\frac{2}{2}$$

6.



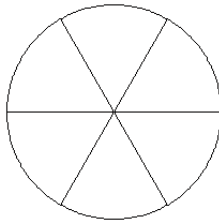
$$\frac{5}{11}$$

7.



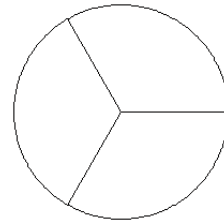
$$\frac{5}{8}$$

8.



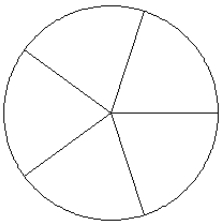
$$\frac{1}{6}$$

9.



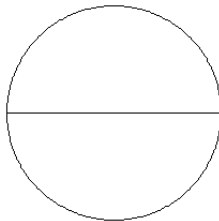
$$\frac{2}{3}$$

10.



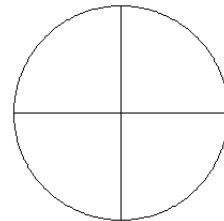
$$\frac{3}{5}$$

11.



$$\frac{1}{2}$$

12.

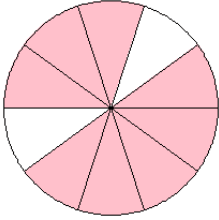


$$\frac{2}{4}$$

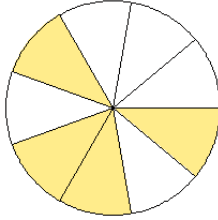
Modelos de Fracciones (D) Respuestas

Coloree secciones de cada círculo para modelar cada fracción.

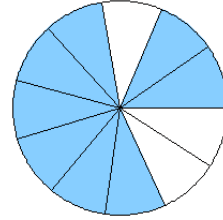
1.



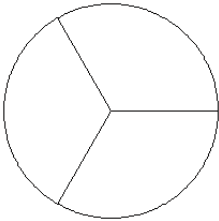
2.



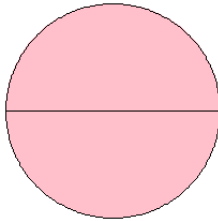
3.



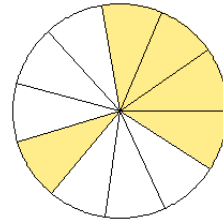
4.



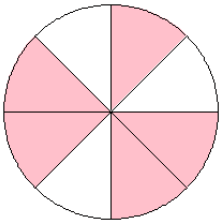
5.



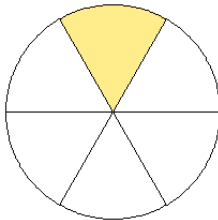
6.



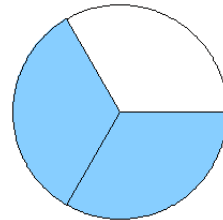
7.



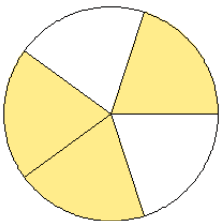
8.



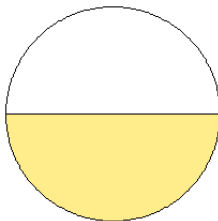
9.



10.



11.



12.

