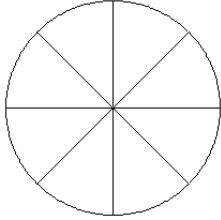


Modelos de Fracciones (G)

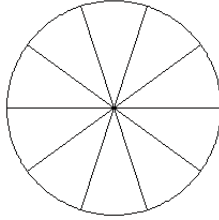
Coloree secciones de cada círculo para modelar cada fracción.

1.



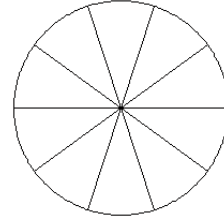
$$\frac{3}{8}$$

2.



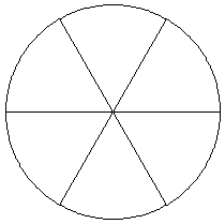
$$\frac{3}{10}$$

3.



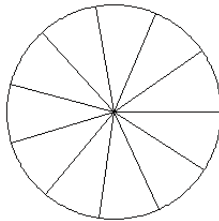
$$\frac{7}{10}$$

4.



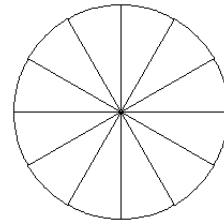
$$\frac{3}{6}$$

5.



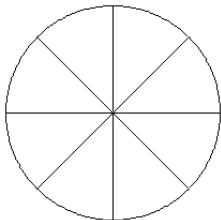
$$\frac{5}{11}$$

6.



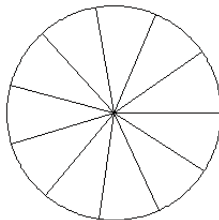
$$\frac{3}{12}$$

7.



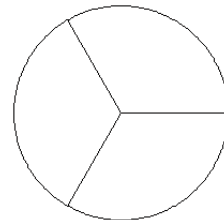
$$\frac{2}{8}$$

8.



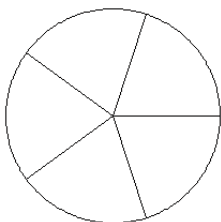
$$\frac{4}{11}$$

9.



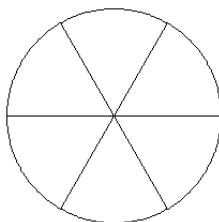
$$\frac{1}{3}$$

10.



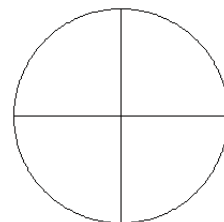
$$\frac{1}{5}$$

11.



$$\frac{2}{6}$$

12.

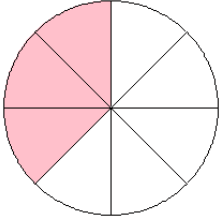


$$\frac{1}{4}$$

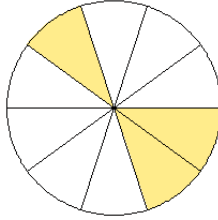
Modelos de Fracciones (G) Respuestas

Coloree secciones de cada círculo para modelar cada fracción.

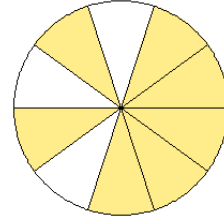
1.



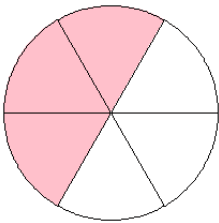
2.



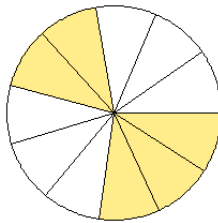
3.



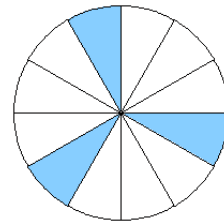
4.



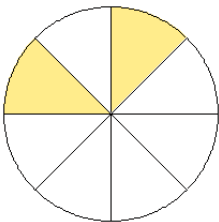
5.



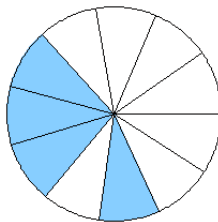
6.



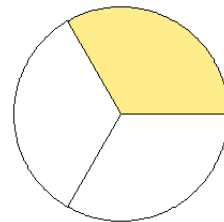
7.



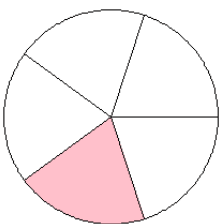
8.



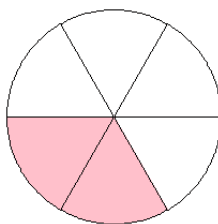
9.



10.



11.



12.

