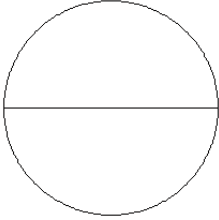


# Modelos de Fracciones (J)

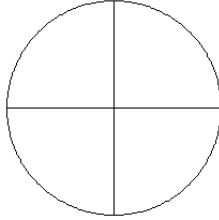
Coloree secciones de cada círculo para modelar cada fracción.

1.



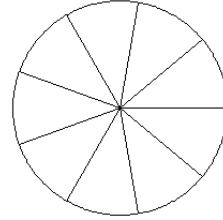
$$\frac{2}{2}$$

2.



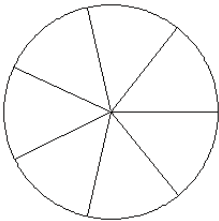
$$\frac{2}{4}$$

3.



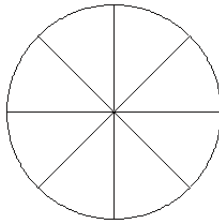
$$\frac{3}{9}$$

4.



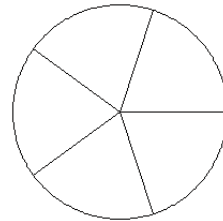
$$\frac{2}{7}$$

5.



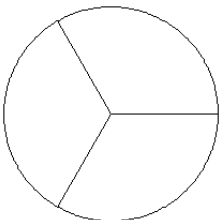
$$\frac{1}{8}$$

6.



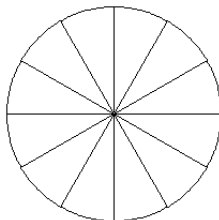
$$\frac{4}{5}$$

7.



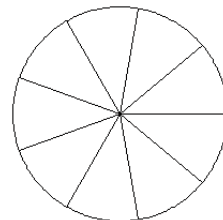
$$\frac{1}{3}$$

8.



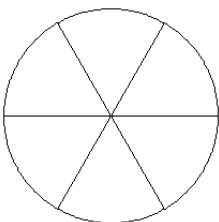
$$\frac{6}{12}$$

9.



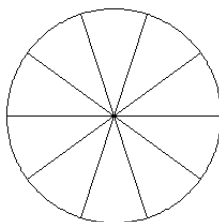
$$\frac{4}{9}$$

10.



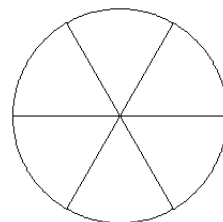
$$\frac{4}{6}$$

11.



$$\frac{6}{10}$$

12.

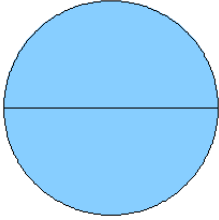


$$\frac{3}{6}$$

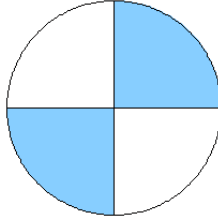
# Modelos de Fracciones (J) Respuestas

Coloree secciones de cada círculo para modelar cada fracción.

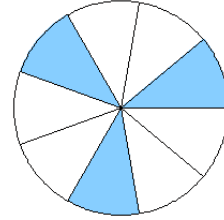
1.



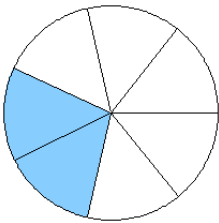
2.



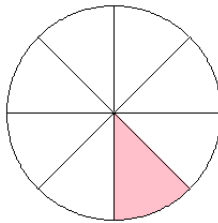
3.



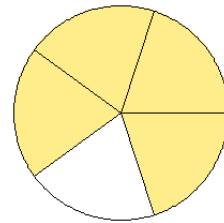
4.



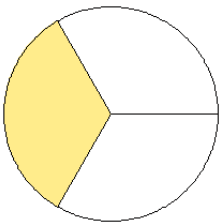
5.



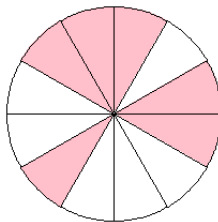
6.



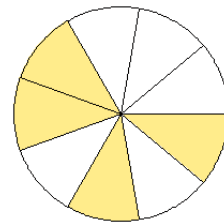
7.



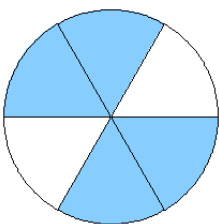
8.



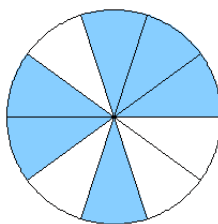
9.



10.



11.



12.

