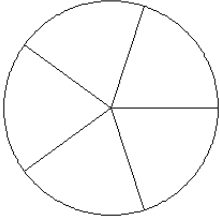


# Modelos de Fracciones (H)

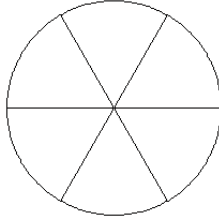
Coloree secciones de cada círculo para modelar cada fracción.

1.



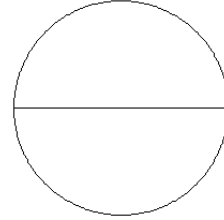
$$\frac{1}{5}$$

2.



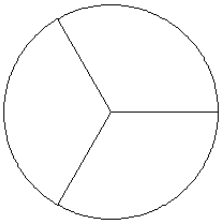
$$\frac{2}{6}$$

3.



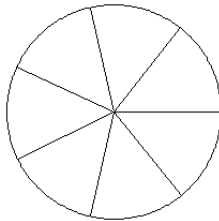
$$\frac{1}{2}$$

4.



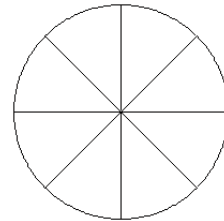
$$\frac{0}{3}$$

5.



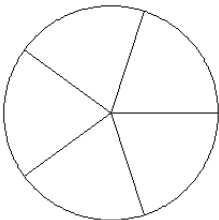
$$\frac{3}{7}$$

6.



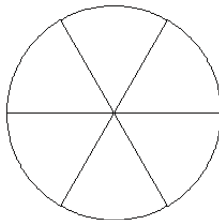
$$\frac{3}{8}$$

7.



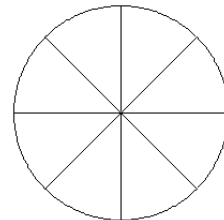
$$\frac{1}{5}$$

8.



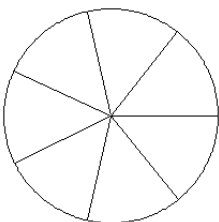
$$\frac{3}{6}$$

9.



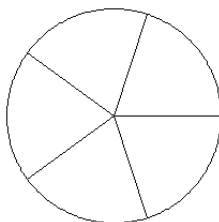
$$\frac{3}{8}$$

10.



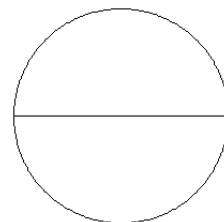
$$\frac{2}{7}$$

11.



$$\frac{3}{5}$$

12.

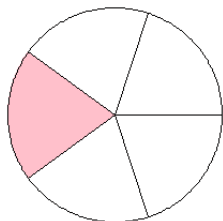


$$\frac{2}{2}$$

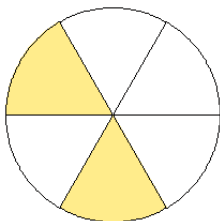
# Modelos de Fracciones (H) Respuestas

Coloree secciones de cada círculo para modelar cada fracción.

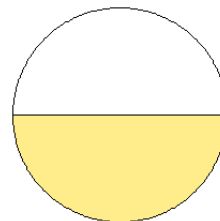
1.



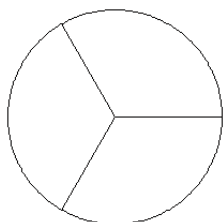
2.



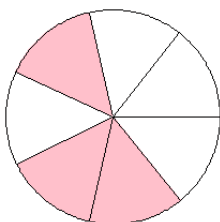
3.



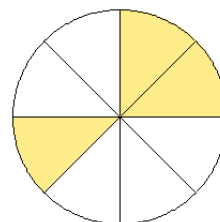
4.



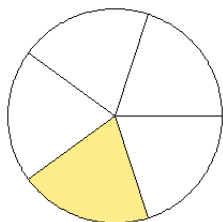
5.



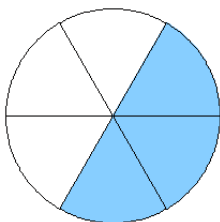
6.



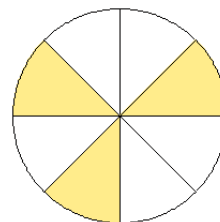
7.



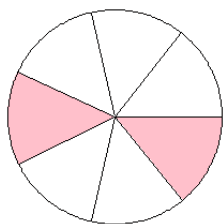
8.



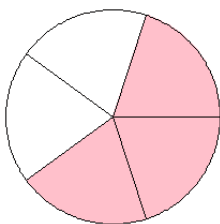
9.



10.



11.



12.

