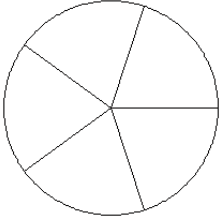


Modelos de Fracciones (E)

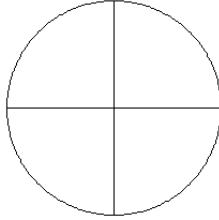
Coloree secciones de cada círculo para modelar cada fracción.

1.



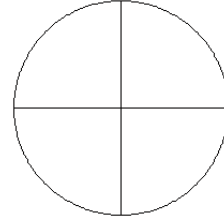
$$\frac{1}{5}$$

2.



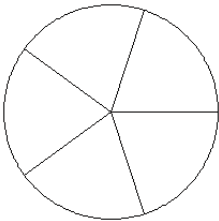
$$\frac{2}{4}$$

3.



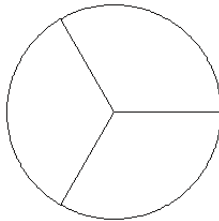
$$\frac{1}{4}$$

4.



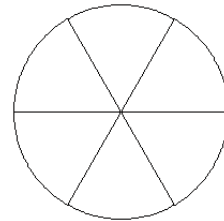
$$\frac{1}{5}$$

5.



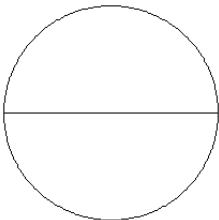
$$\frac{0}{3}$$

6.



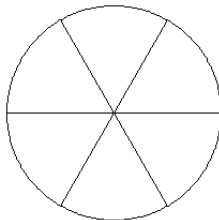
$$\frac{4}{6}$$

7.



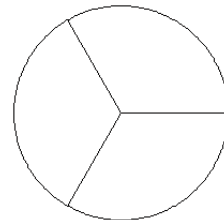
$$\frac{2}{2}$$

8.



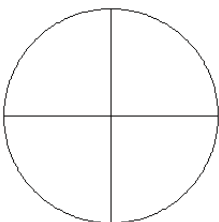
$$\frac{2}{6}$$

9.



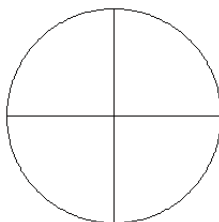
$$\frac{2}{3}$$

10.



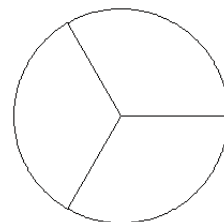
$$\frac{1}{4}$$

11.



$$\frac{0}{4}$$

12.

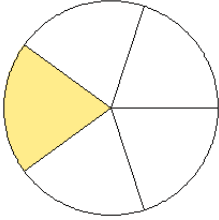


$$\frac{0}{3}$$

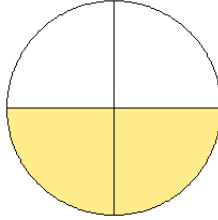
Modelos de Fracciones (E) Respuestas

Coloree secciones de cada círculo para modelar cada fracción.

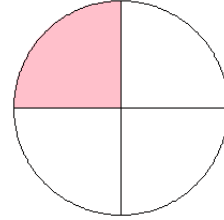
1.



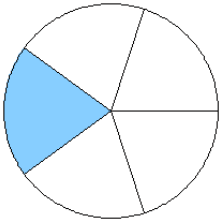
2.



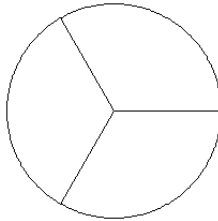
3.



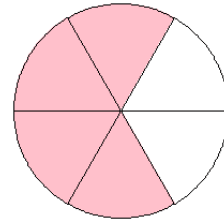
4.



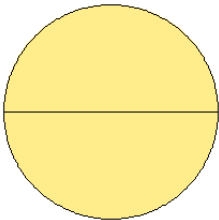
5.



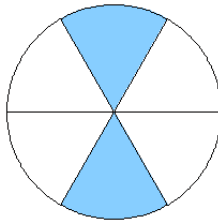
6.



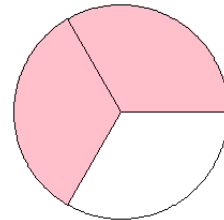
7.



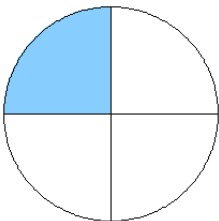
8.



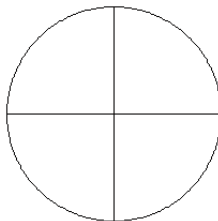
9.



10.



11.



12.

