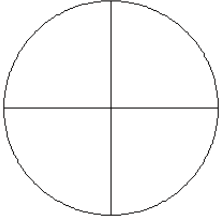


Modelos de Fracciones (A)

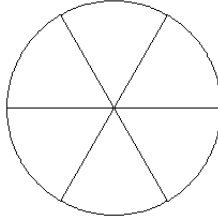
Coloree secciones de cada círculo para modelar cada fracción.

1.



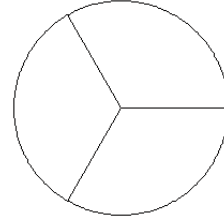
$$\frac{4}{4}$$

2.



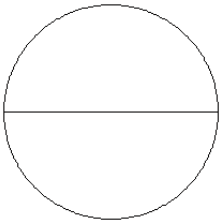
$$\frac{4}{6}$$

3.



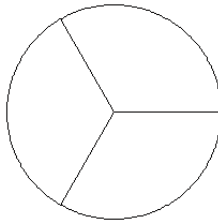
$$\frac{2}{3}$$

4.



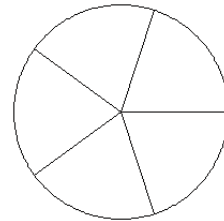
$$\frac{0}{2}$$

5.



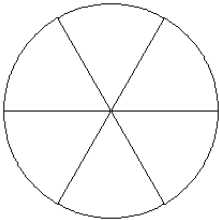
$$\frac{1}{3}$$

6.



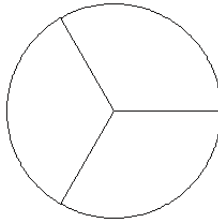
$$\frac{4}{5}$$

7.



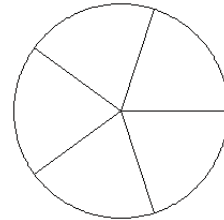
$$\frac{3}{6}$$

8.



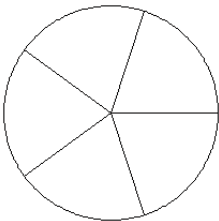
$$\frac{2}{3}$$

9.



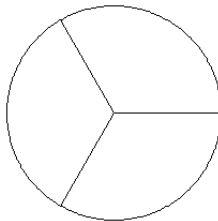
$$\frac{3}{5}$$

10.



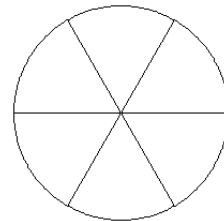
$$\frac{3}{5}$$

11.



$$\frac{0}{3}$$

12.

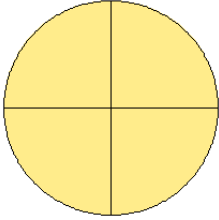


$$\frac{2}{6}$$

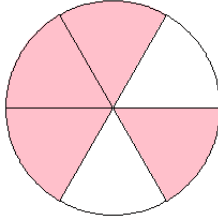
Modelos de Fracciones (A) Respuestas

Coloree secciones de cada círculo para modelar cada fracción.

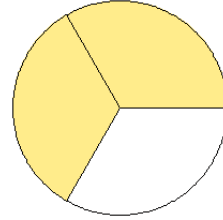
1.



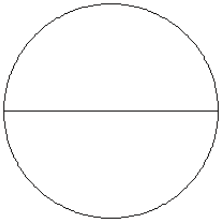
2.



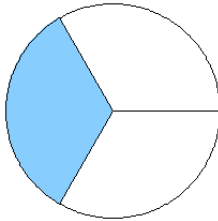
3.



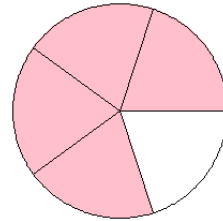
4.



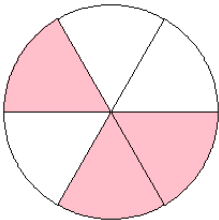
5.



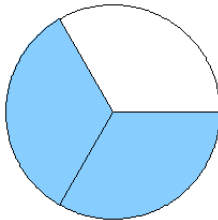
6.



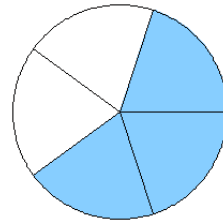
7.



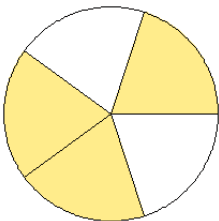
8.



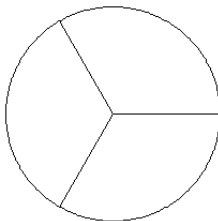
9.



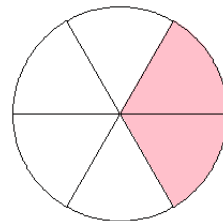
10.



11.



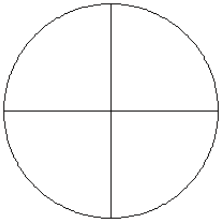
12.



Modelos de Fracciones (B)

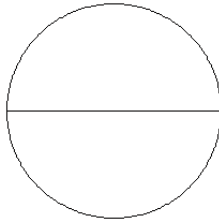
Coloree secciones de cada círculo para modelar cada fracción.

1.



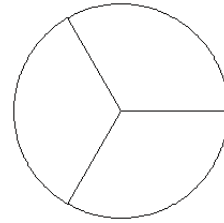
$$\frac{2}{4}$$

2.



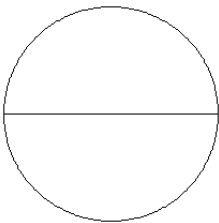
$$\frac{2}{2}$$

3.



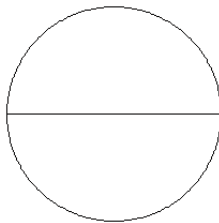
$$\frac{1}{3}$$

4.



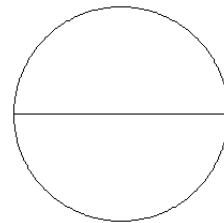
$$\frac{2}{2}$$

5.



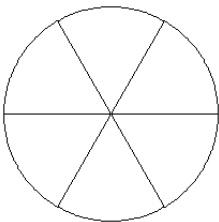
$$\frac{1}{2}$$

6.



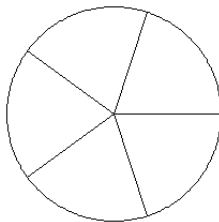
$$\frac{0}{2}$$

7.



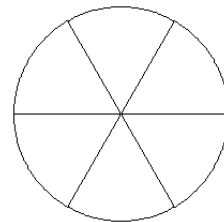
$$\frac{3}{6}$$

8.



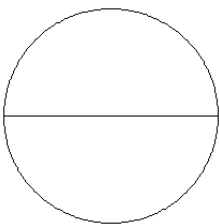
$$\frac{2}{5}$$

9.



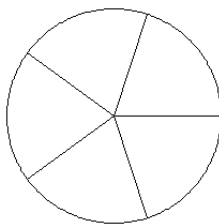
$$\frac{3}{6}$$

10.



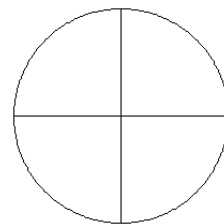
$$\frac{2}{2}$$

11.



$$\frac{3}{5}$$

12.

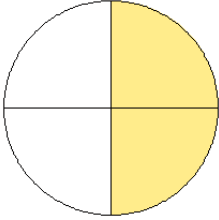


$$\frac{2}{4}$$

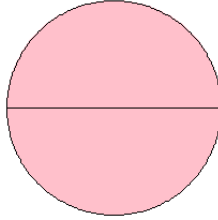
Modelos de Fracciones (B) Respuestas

Coloree secciones de cada círculo para modelar cada fracción.

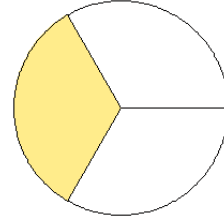
1.



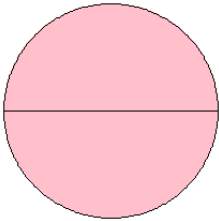
2.



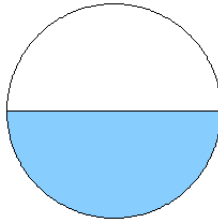
3.



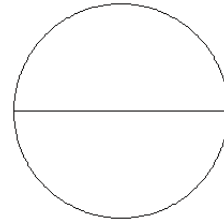
4.



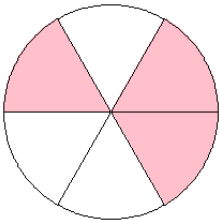
5.



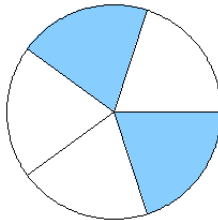
6.



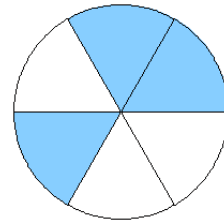
7.



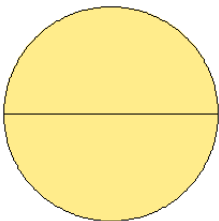
8.



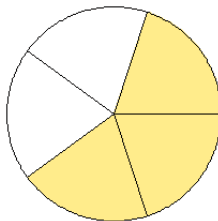
9.



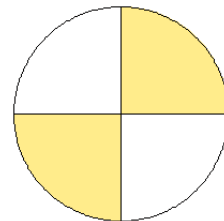
10.



11.



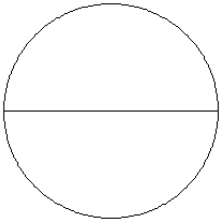
12.



Modelos de Fracciones (C)

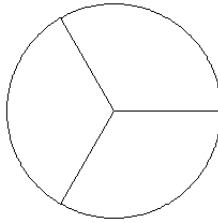
Coloree secciones de cada círculo para modelar cada fracción.

1.



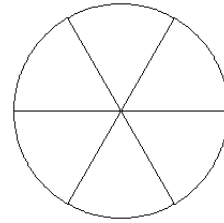
$$\frac{2}{2}$$

2.



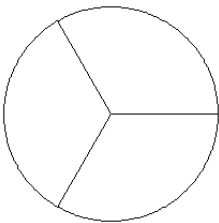
$$\frac{1}{3}$$

3.



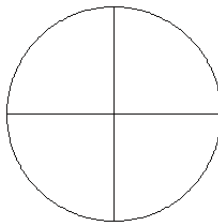
$$\frac{2}{6}$$

4.



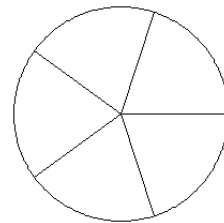
$$\frac{1}{3}$$

5.



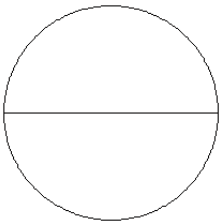
$$\frac{2}{4}$$

6.



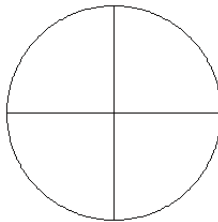
$$\frac{2}{5}$$

7.



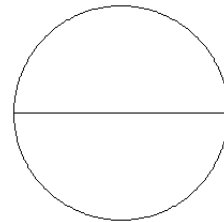
$$\frac{2}{2}$$

8.



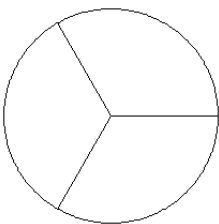
$$\frac{1}{4}$$

9.



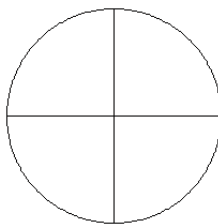
$$\frac{1}{2}$$

10.



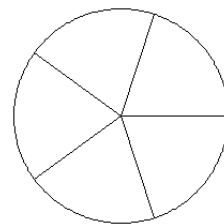
$$\frac{2}{3}$$

11.



$$\frac{2}{4}$$

12.

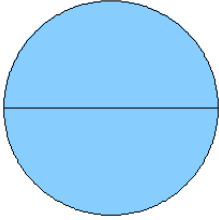


$$\frac{3}{5}$$

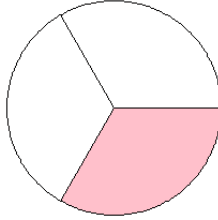
Modelos de Fracciones (C) Respuestas

Coloree secciones de cada círculo para modelar cada fracción.

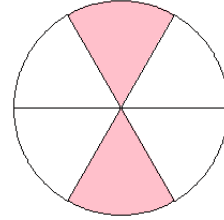
1.



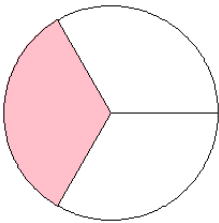
2.



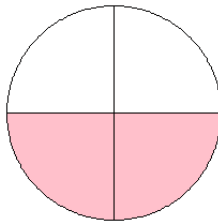
3.



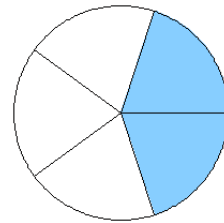
4.



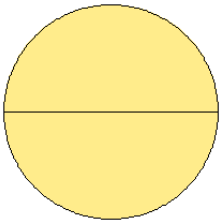
5.



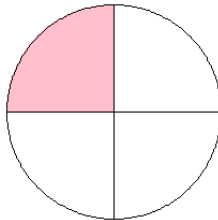
6.



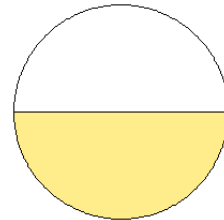
7.



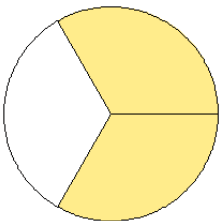
8.



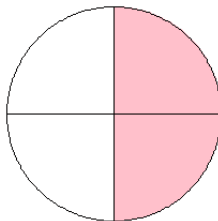
9.



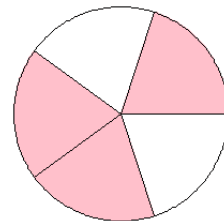
10.



11.



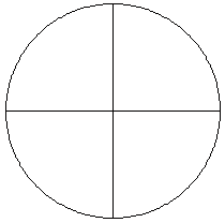
12.



Modelos de Fracciones (D)

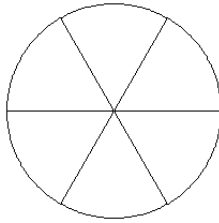
Coloree secciones de cada círculo para modelar cada fracción.

1.



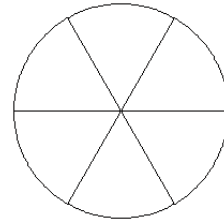
$$\frac{2}{4}$$

2.



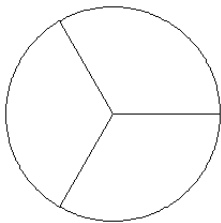
$$\frac{3}{6}$$

3.



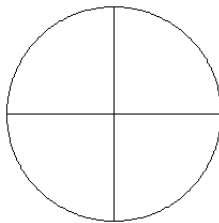
$$\frac{4}{6}$$

4.



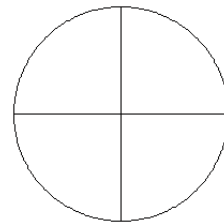
$$\frac{1}{3}$$

5.



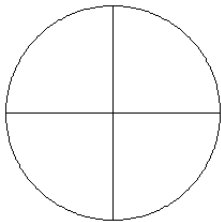
$$\frac{1}{4}$$

6.



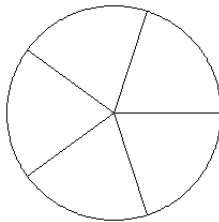
$$\frac{3}{4}$$

7.



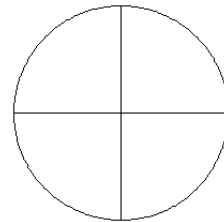
$$\frac{0}{4}$$

8.



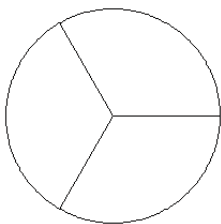
$$\frac{3}{5}$$

9.



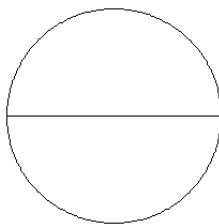
$$\frac{3}{4}$$

10.



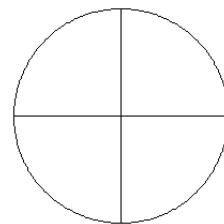
$$\frac{1}{3}$$

11.



$$\frac{2}{2}$$

12.

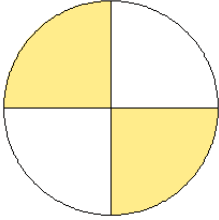


$$\frac{1}{4}$$

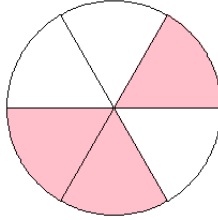
Modelos de Fracciones (D) Respuestas

Coloree secciones de cada círculo para modelar cada fracción.

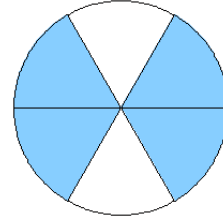
1.



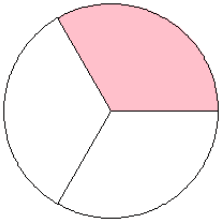
2.



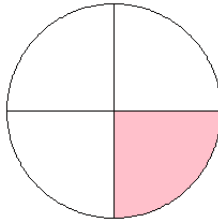
3.



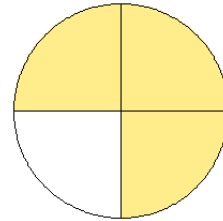
4.



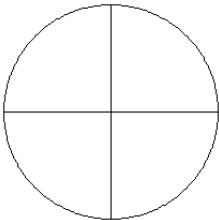
5.



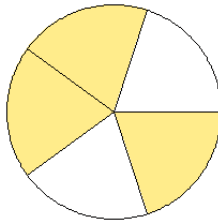
6.



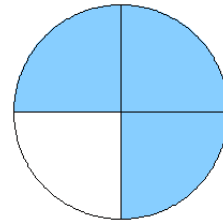
7.



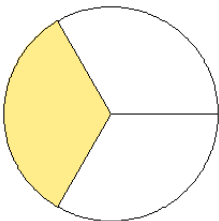
8.



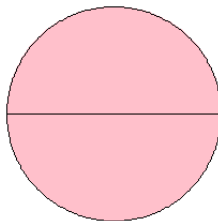
9.



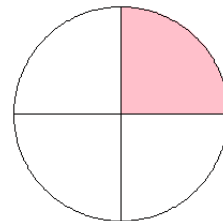
10.



11.



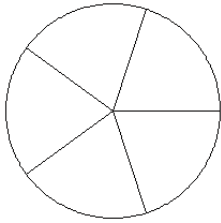
12.



Modelos de Fracciones (E)

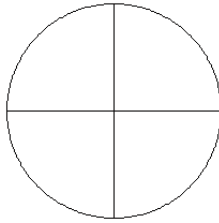
Coloree secciones de cada círculo para modelar cada fracción.

1.



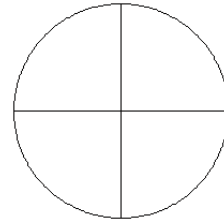
$$\frac{1}{5}$$

2.



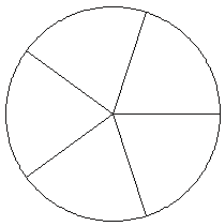
$$\frac{2}{4}$$

3.



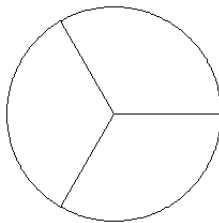
$$\frac{1}{4}$$

4.



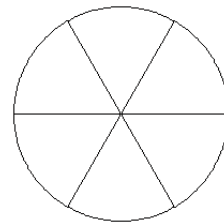
$$\frac{1}{5}$$

5.



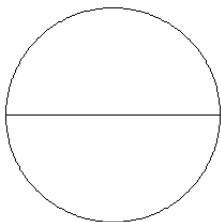
$$\frac{0}{3}$$

6.



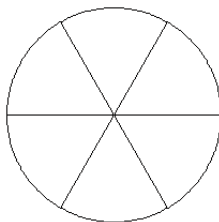
$$\frac{4}{6}$$

7.



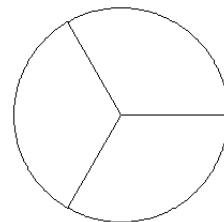
$$\frac{2}{2}$$

8.



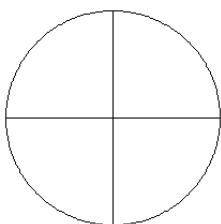
$$\frac{2}{6}$$

9.



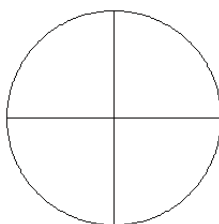
$$\frac{2}{3}$$

10.



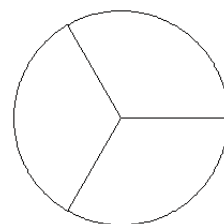
$$\frac{1}{4}$$

11.



$$\frac{0}{4}$$

12.

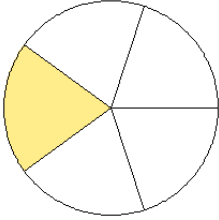


$$\frac{0}{3}$$

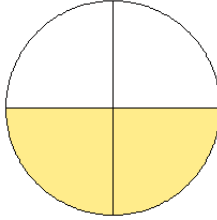
Modelos de Fracciones (E) Respuestas

Coloree secciones de cada círculo para modelar cada fracción.

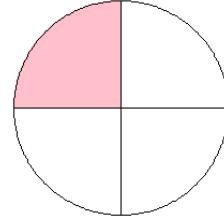
1.



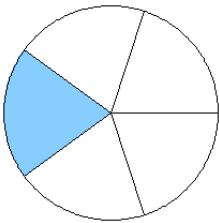
2.



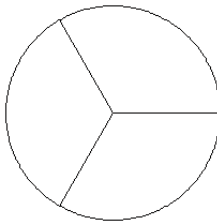
3.



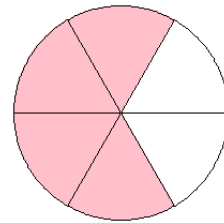
4.



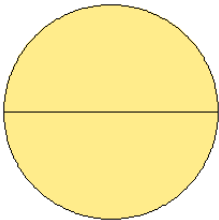
5.



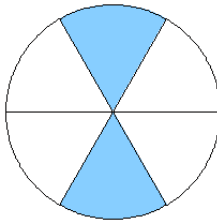
6.



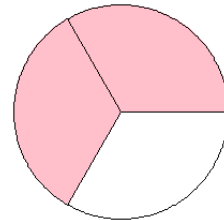
7.



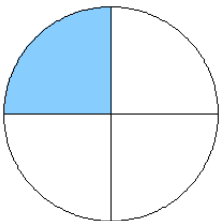
8.



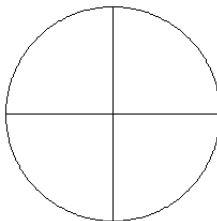
9.



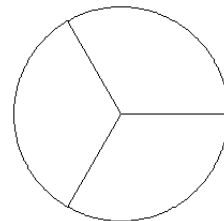
10.



11.



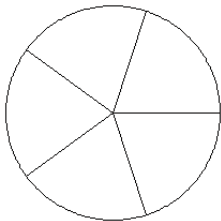
12.



Modelos de Fracciones (F)

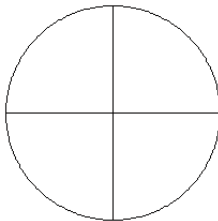
Coloree secciones de cada círculo para modelar cada fracción.

1.



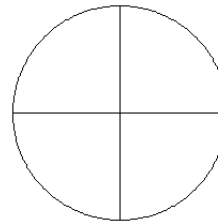
$$\frac{2}{5}$$

2.



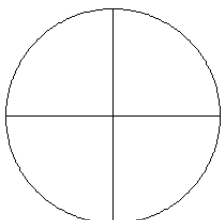
$$\frac{3}{4}$$

3.



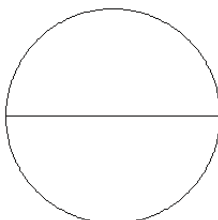
$$\frac{1}{4}$$

4.



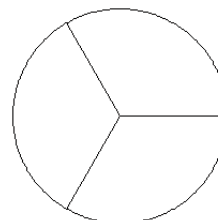
$$\frac{3}{4}$$

5.



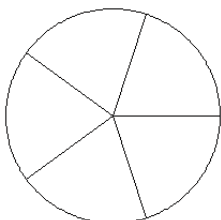
$$\frac{0}{2}$$

6.



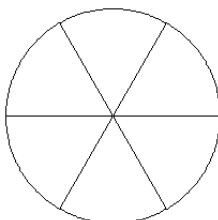
$$\frac{0}{3}$$

7.



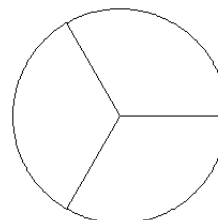
$$\frac{3}{5}$$

8.



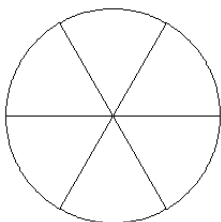
$$\frac{2}{6}$$

9.



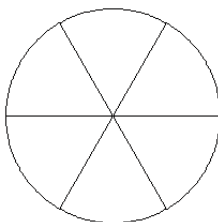
$$\frac{2}{3}$$

10.



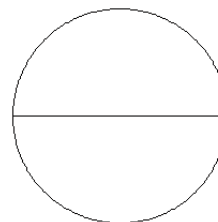
$$\frac{3}{6}$$

11.



$$\frac{5}{6}$$

12.

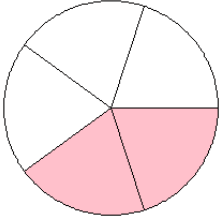


$$\frac{2}{2}$$

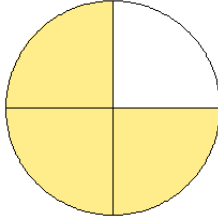
Modelos de Fracciones (F) Respuestas

Coloree secciones de cada círculo para modelar cada fracción.

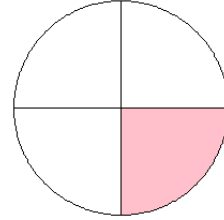
1.



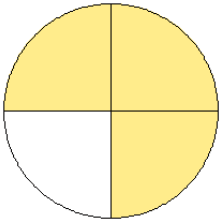
2.



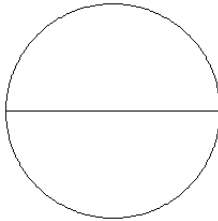
3.



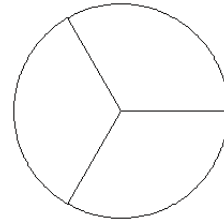
4.



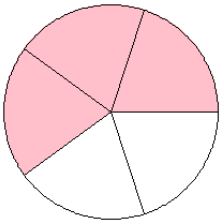
5.



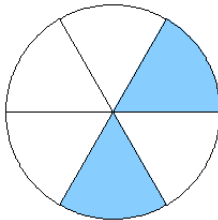
6.



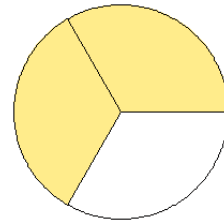
7.



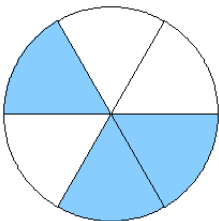
8.



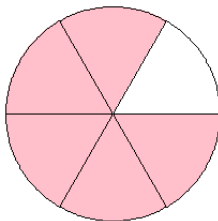
9.




10.



11.



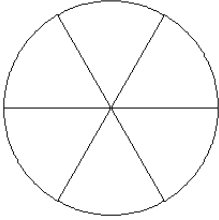
12.



Modelos de Fracciones (G)

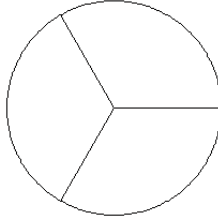
Coloree secciones de cada círculo para modelar cada fracción.

1.



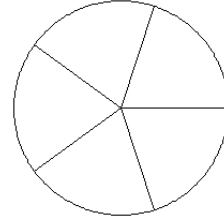
$$\frac{3}{6}$$

2.



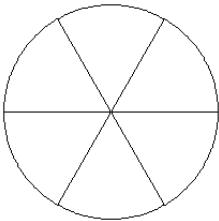
$$\frac{2}{3}$$

3.



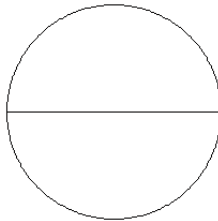
$$\frac{5}{5}$$

4.



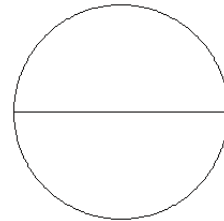
$$\frac{3}{6}$$

5.



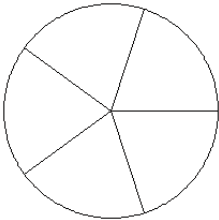
$$\frac{0}{2}$$

6.



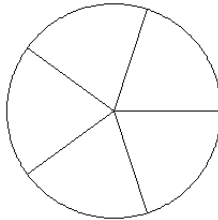
$$\frac{1}{2}$$

7.



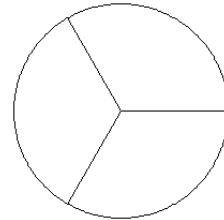
$$\frac{3}{5}$$

8.



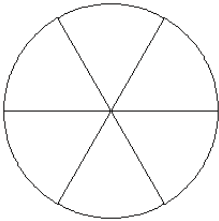
$$\frac{3}{5}$$

9.



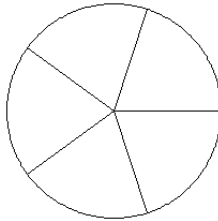
$$\frac{2}{3}$$

10.



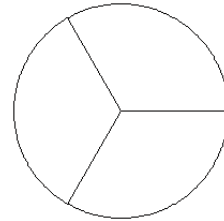
$$\frac{2}{6}$$

11.



$$\frac{1}{5}$$

12.

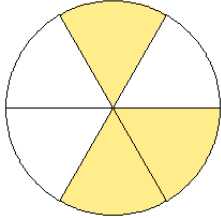


$$\frac{1}{3}$$

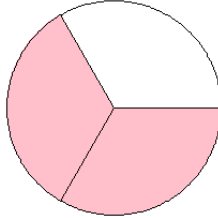
Modelos de Fracciones (G) Respuestas

Coloree secciones de cada círculo para modelar cada fracción.

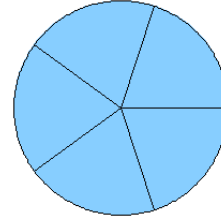
1.



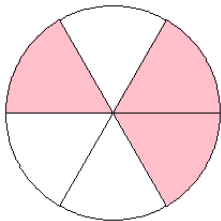
2.



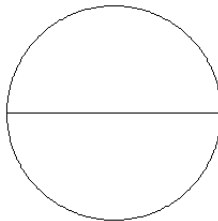
3.



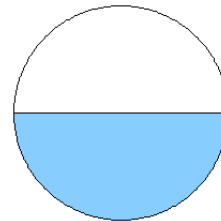
4.



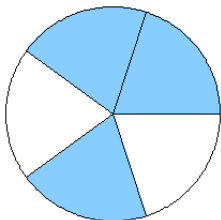
5.



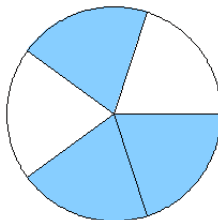
6.



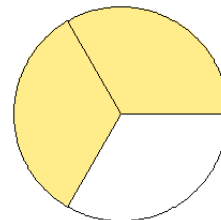
7.



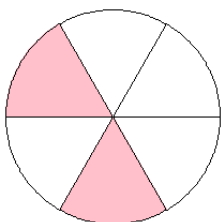
8.



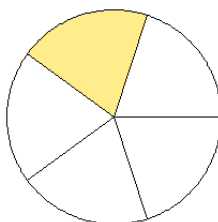
9.



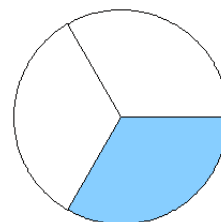
10.



11.



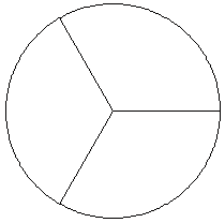
12.



Modelos de Fracciones (H)

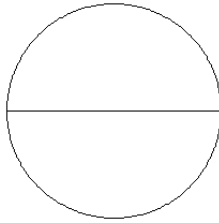
Coloree secciones de cada círculo para modelar cada fracción.

1.



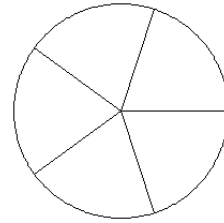
$$\frac{2}{3}$$

2.



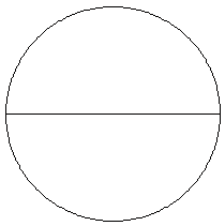
$$\frac{1}{2}$$

3.



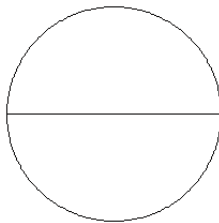
$$\frac{2}{5}$$

4.



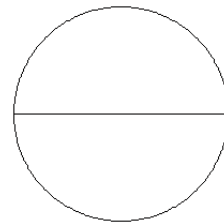
$$\frac{2}{2}$$

5.



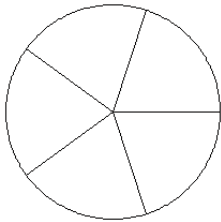
$$\frac{0}{2}$$

6.



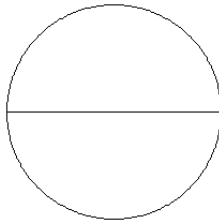
$$\frac{2}{2}$$

7.



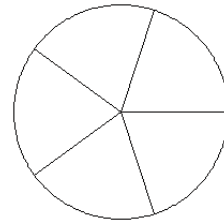
$$\frac{4}{5}$$

8.



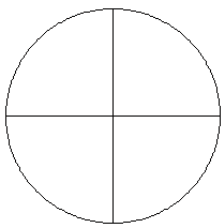
$$\frac{1}{2}$$

9.



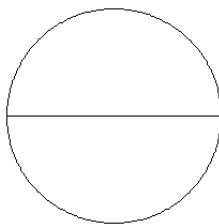
$$\frac{1}{5}$$

10.



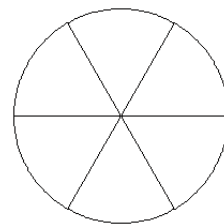
$$\frac{4}{4}$$

11.



$$\frac{2}{2}$$

12.

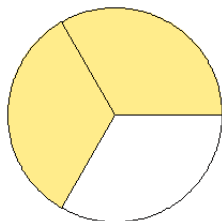


$$\frac{2}{6}$$

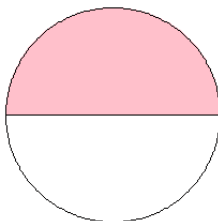
Modelos de Fracciones (H) Respuestas

Coloree secciones de cada círculo para modelar cada fracción.

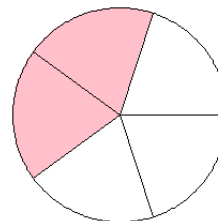
1.



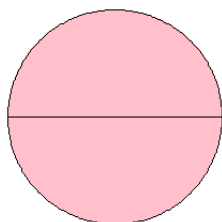
2.



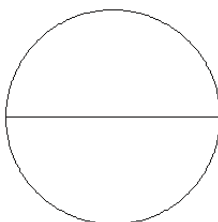
3.




4.



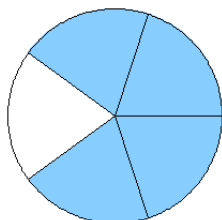
5.



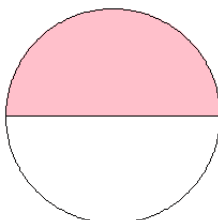
6.



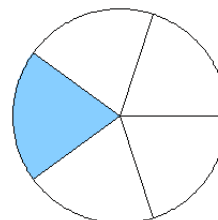
7.



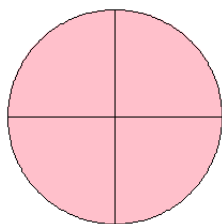
8.




9.



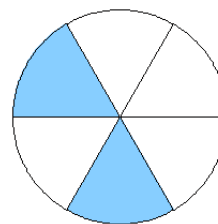
10.



11.



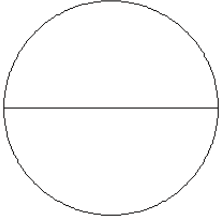
12.



Modelos de Fracciones (I)

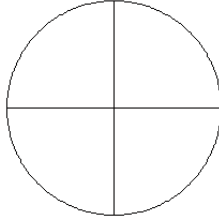
Coloree secciones de cada círculo para modelar cada fracción.

1.



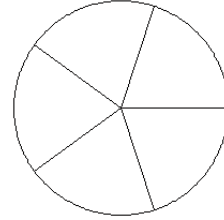
$$\frac{1}{2}$$

2.



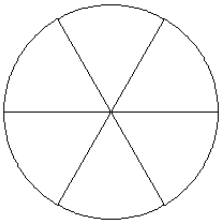
$$\frac{2}{4}$$

3.



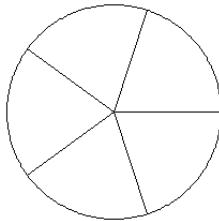
$$\frac{4}{5}$$

4.



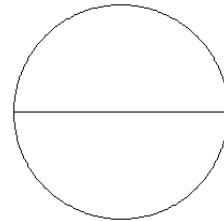
$$\frac{3}{6}$$

5.



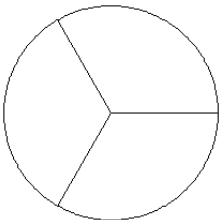
$$\frac{1}{5}$$

6.



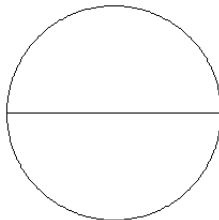
$$\frac{1}{2}$$

7.



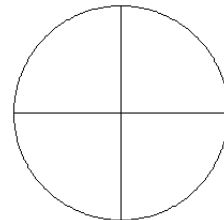
$$\frac{0}{3}$$

8.



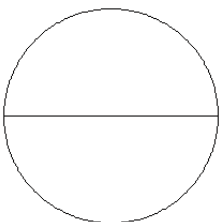
$$\frac{1}{2}$$

9.



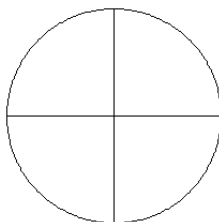
$$\frac{2}{4}$$

10.



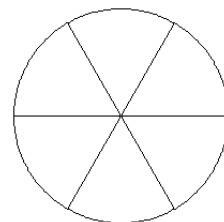
$$\frac{1}{2}$$

11.



$$\frac{0}{4}$$

12.

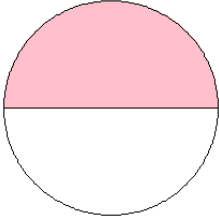


$$\frac{0}{6}$$

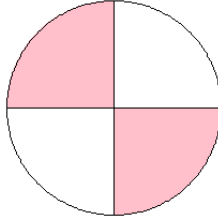
Modelos de Fracciones (I) Respuestas

Coloree secciones de cada círculo para modelar cada fracción.

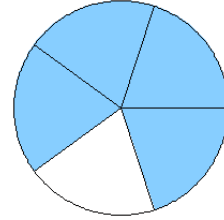
1.



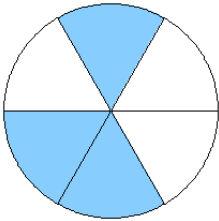
2.



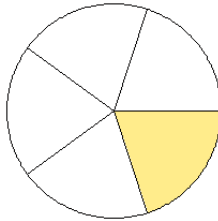
3.



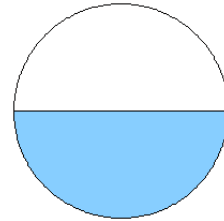
4.



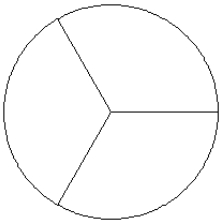
5.



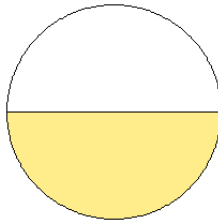
6.



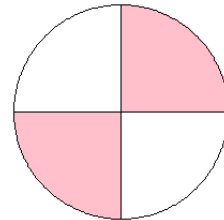
7.



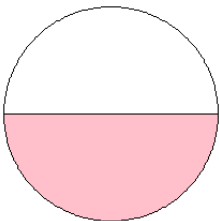
8.



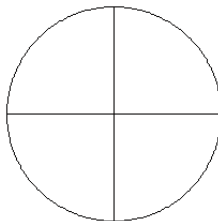
9.



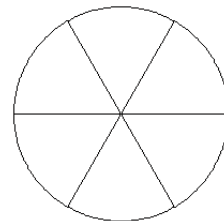
10.



11.



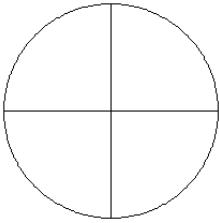
12.



Modelos de Fracciones (J)

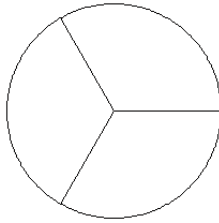
Coloree secciones de cada círculo para modelar cada fracción.

1.



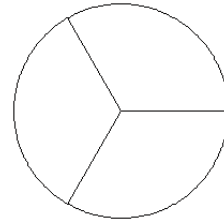
$$\frac{1}{4}$$

2.



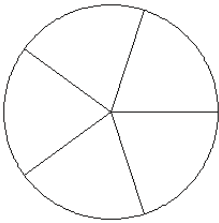
$$\frac{0}{3}$$

3.



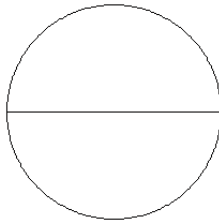
$$\frac{0}{3}$$

4.



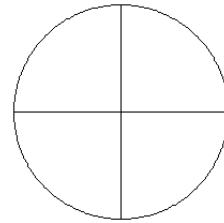
$$\frac{2}{5}$$

5.



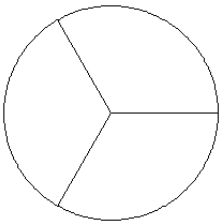
$$\frac{1}{2}$$

6.



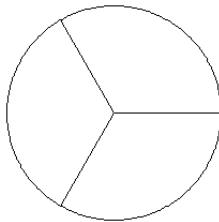
$$\frac{3}{4}$$

7.



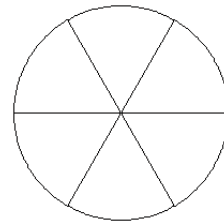
$$\frac{1}{3}$$

8.



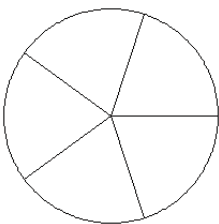
$$\frac{1}{3}$$

9.



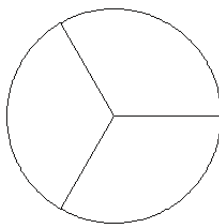
$$\frac{3}{6}$$

10.



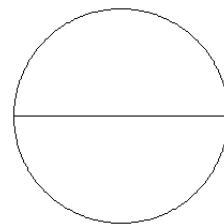
$$\frac{3}{5}$$

11.



$$\frac{2}{3}$$

12.

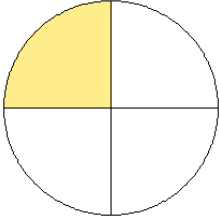


$$\frac{2}{2}$$

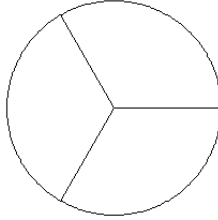
Modelos de Fracciones (J) Respuestas

Coloree secciones de cada círculo para modelar cada fracción.

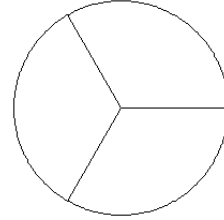
1.



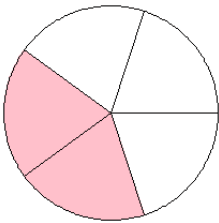
2.



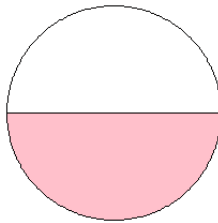
3.



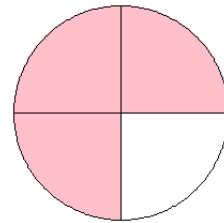
4.



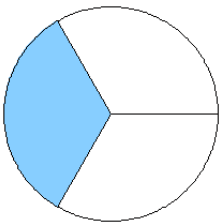
5.



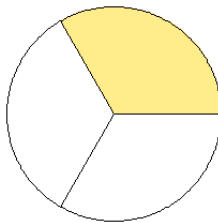
6.



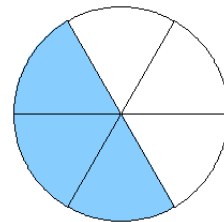
7.



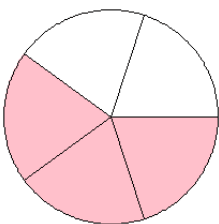
8.



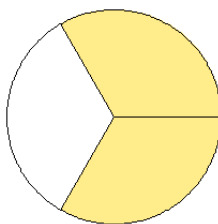
9.



10.



11.



12.

