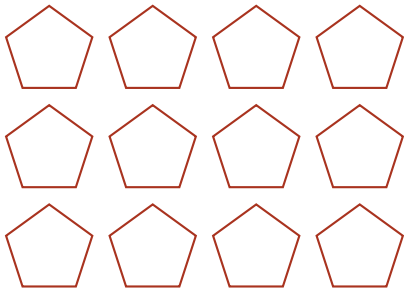


# Colorear Fracciones (F)

Coloreen cada grupo de figuras para representar la fracción correspondiente.


1.

$$\frac{1}{3}$$




2.

$$\frac{2}{3}$$




3.

$$\frac{1}{2}$$




4.

$$\frac{1}{2}$$



5.

$$\frac{3}{4}$$



6.

$$\frac{1}{4}$$

