



# Proporciones de Verano (A)

Escriba cada proporción en números, y simplifique de ser necesario.




$$\text{🕶️} : \text{🏰} =$$

$$\text{🕶️} : (\text{🕶️} + \text{🏰}) =$$



$$\text{🚲} : \text{🏖️} =$$

$$\text{🚲} : (\text{🚲} + \text{🏖️}) =$$



$$\text{☀️} : \text{🛟} =$$

$$\text{☀️} : (\text{☀️} + \text{🛟}) =$$




$$\text{🪣} : \text{🌻} =$$

$$\text{🪣} : (\text{🪣} + \text{🌻}) =$$


# Proporciones de Verano (A) Respuestas

Escriba cada proporción en números, y simplifique de ser necesario.




$$\begin{aligned} \text{🕶️} : \text{🏰} &= 5 : 10 \\ &= 1 : 2 \end{aligned}$$

$$\begin{aligned} \text{🕶️} : (\text{🕶️} + \text{🏰}) &= 5 : 15 \\ &= 1 : 3 \end{aligned}$$



$$\begin{aligned} \text{🚲} : \text{🏐} &= 11 : 11 \\ &= 1 : 1 \end{aligned}$$

$$\begin{aligned} \text{🚲} : (\text{🚲} + \text{🏐}) &= 11 : 22 \\ &= 1 : 2 \end{aligned}$$



$$\text{☀️} : \text{🛡️} = 15 : 8$$

$$\text{☀️} : (\text{☀️} + \text{🛡️}) = 15 : 23$$



$$\text{🪣️} : \text{🌻} = 18 : 5$$

$$\text{🪣️} : (\text{🪣️} + \text{🌻}) = 18 : 23$$